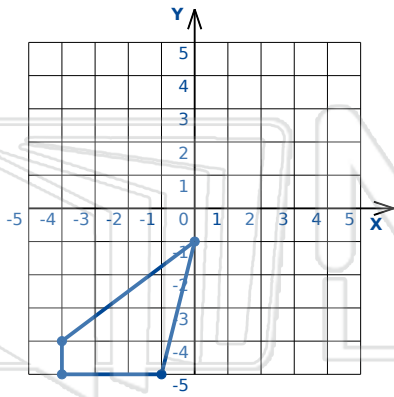




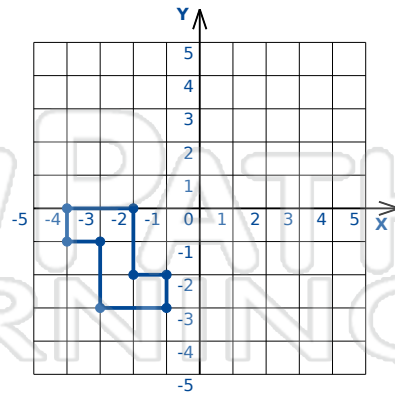
# Reflections

Math

Name \_\_\_\_\_ Class \_\_\_\_\_ Date \_\_\_\_\_



Reflection: Across the y-axis

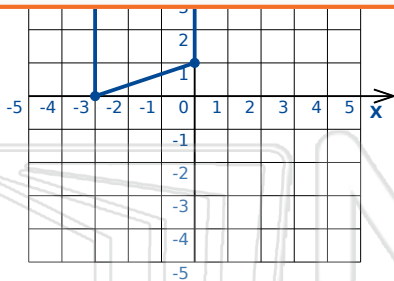


Reflection: Across the y-axis

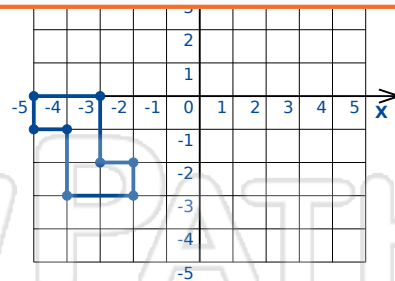


## PREVIEW

Please [Sign In](#) or [Sign Up](#) to download the printable version of this worksheet



Reflection: Across Line  $y = x$



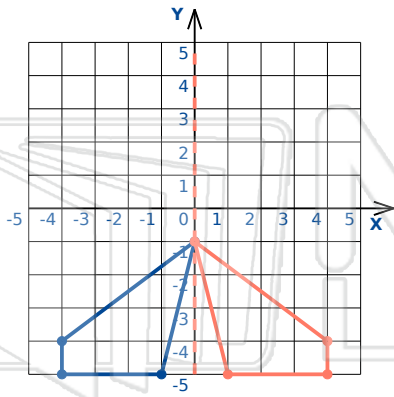
Reflection: Across Line  $y = -x$



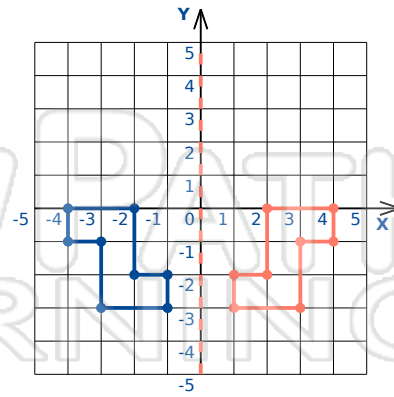
# Reflections - Answer Key

Math

Name \_\_\_\_\_ Class \_\_\_\_\_ Date \_\_\_\_\_



Reflection: Across the y-axis

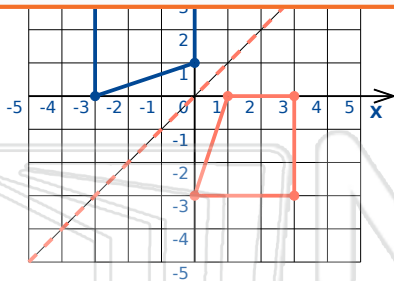


Reflection: Across the y-axis

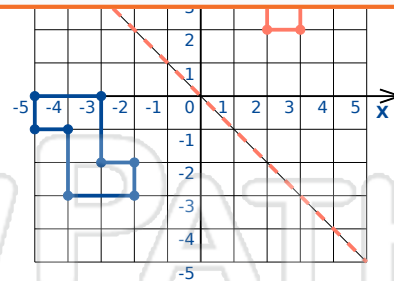


## PREVIEW

Please [Sign In](#) or [Sign Up](#) to download the printable version of this worksheet



Reflection: Across Line  $y = x$



Reflection: Across Line  $y = -x$