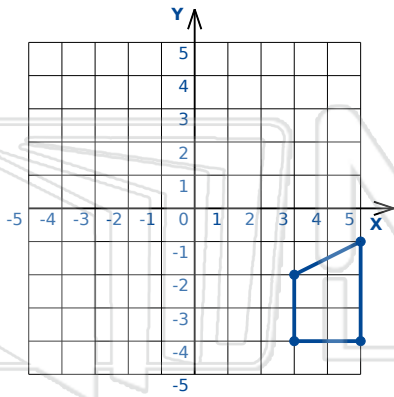




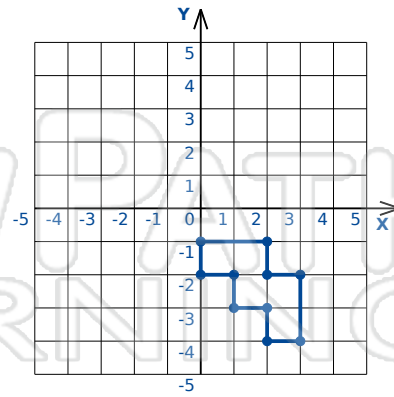
Rotations Triangles/Polygons

Math

Name _____ Class _____ Date _____



Rotation: 180° clockwise about the origin

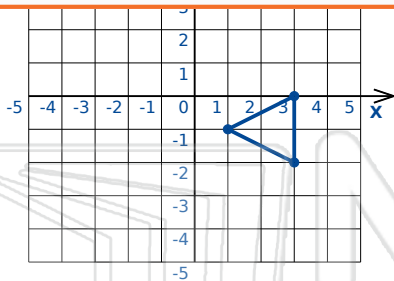


Rotation: 180° clockwise about the origin

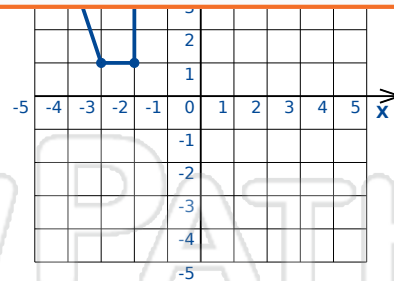


PREVIEW

Please [Sign In](#) or [Sign Up](#) to download the printable version of this worksheet



Rotation: 90° clockwise about the origin

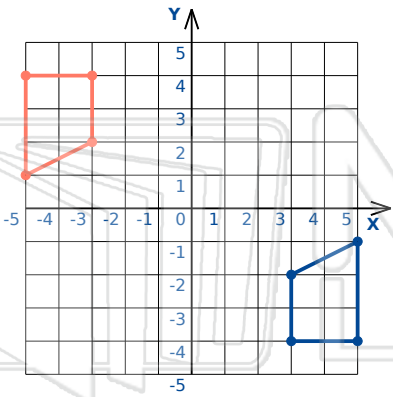


Rotation: 90° ccw about the origin

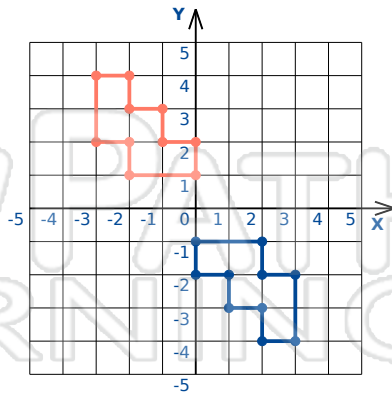


Rotations Triangles/Polygons - Answer Key

Name _____ Class _____ Date _____



Rotation: 180° clockwise about the origin

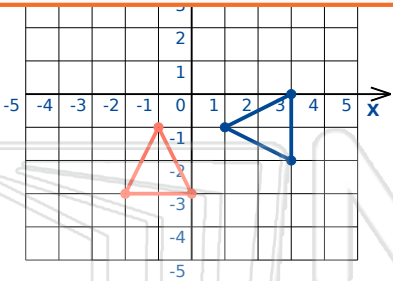


Rotation: 180° clockwise about the origin

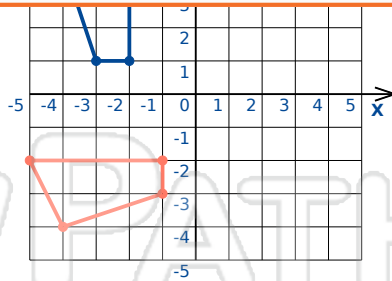


PREVIEW

Please [Sign In](#) or [Sign Up](#) to download the printable version of this worksheet



Rotation: 90° clockwise about the origin



Rotation: 90° ccw about the origin