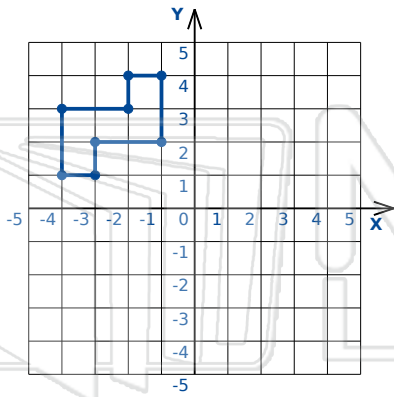




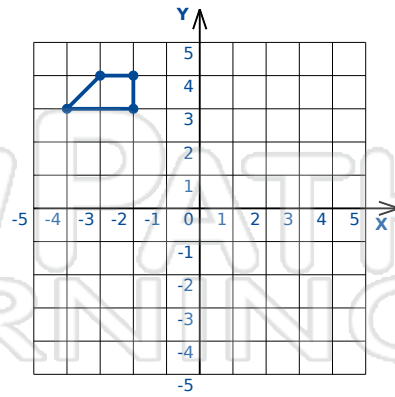
Transformations

Math

Name _____ Class _____ Date _____



Rotation: 90° ccw about the origin

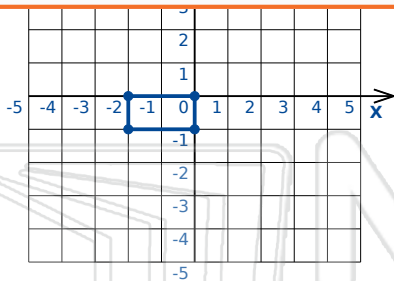


Reflection: Across the x-axis

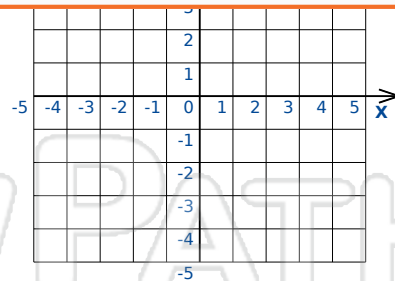


PREVIEW

Please [Sign In](#) or [Sign Up](#) to download the printable version of this worksheet



Translation: 4 right and 5 up



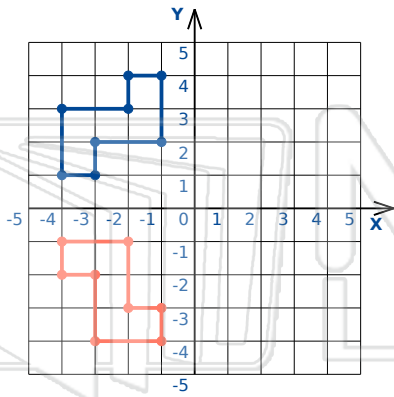
Reflection: Across the y-axis



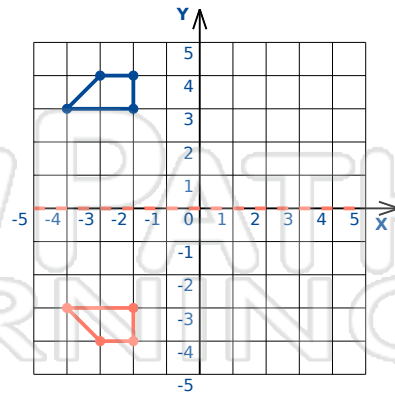
Transformations - Answer Key

Math

Name _____ Class _____ Date _____



Rotation: 90° ccw about the origin

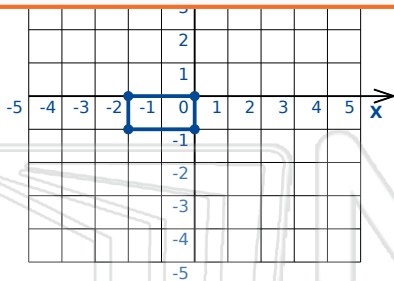


Reflection: Across the x-axis

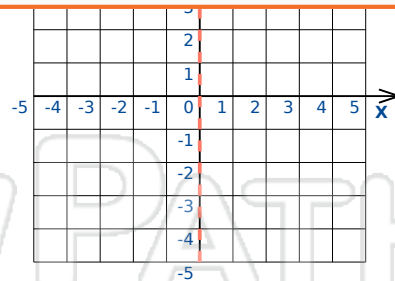


PREVIEW

Please [Sign In](#) or [Sign Up](#) to download the printable version of this worksheet



Translation: 4 right and 5 up



Reflection: Across the y-axis