



Name \_\_\_\_\_ Class \_\_\_\_\_ Date \_\_\_\_\_

1 The decimal **0.056** is equal to what fraction?

- A  $\frac{56}{100}$    B  $\frac{56}{1000}$    C  $\frac{5}{10}$    D  $\frac{14}{25}$

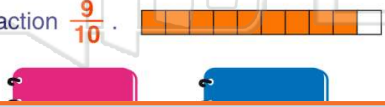


2 There are **100** students in a school and **68** of them are girls. In **lowest terms**, what fraction of the students are girls?

- A  $\frac{34}{50}$    C  $\frac{17}{25}$   
B  $\frac{86}{100}$    D  $\frac{12}{25}$

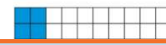


3 The decimal **0.09** is equal to the fraction  $\frac{9}{10}$ .




4 What fraction is equal to **0.20**?

- A  $\frac{1}{5}$    B  $\frac{1}{4}$    C  $\frac{1}{20}$    D  $\frac{1}{10}$



## PREVIEW

Please [Sign In](#) or [Sign Up](#) to download the printable version of this worksheet

7  $c =$  

5	5	5	5
---	---	---	---

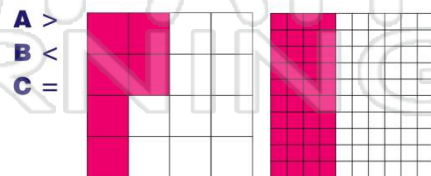
A  $\frac{111}{200}$    B  $5\frac{37}{66}$    C  $5\frac{111}{200}$    D  $\frac{37}{66}$

9 The decimal **10.108** is equal to the fraction  $10\frac{27}{250}$ .

- A true  
B false



10 Compare:  $\frac{6}{16}$   **0.40**





Name \_\_\_\_\_ Class \_\_\_\_\_ Date \_\_\_\_\_

1 The decimal **0.056** is equal to what fraction?

- A  $\frac{56}{100}$
- B  $\frac{56}{1000}$
- C  $\frac{5}{10}$
- D  $\frac{14}{25}$



(B)

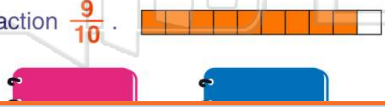
2 There are **100** students in a school and **68** of them are girls. In **lowest terms**, what fraction of the students are girls?

- A  $\frac{34}{50}$
- B  $\frac{86}{100}$
- C  $\frac{17}{25}$
- D  $\frac{12}{25}$



(C)

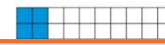
3 The decimal **0.09** is equal to the fraction  $\frac{9}{10}$ .



(B)

4 What fraction is equal to **0.20**?

- A  $\frac{1}{5}$
- B  $\frac{1}{4}$
- C  $\frac{1}{20}$
- D  $\frac{1}{10}$



(A)

5



(D)

## PREVIEW

Please [Sign In](#) or [Sign Up](#) to download the printable version of this worksheet

7

C =



- A  $\frac{111}{200}$
- B  $5\frac{37}{66}$
- C  $5\frac{111}{200}$
- D  $\frac{37}{66}$

(C)

9 The decimal **10.108** is equal to the fraction  $10\frac{27}{250}$ .

- A true
- B false



(A)

10 Compare:  $\frac{6}{16}$   $\triangle$  **0.40**



(B)