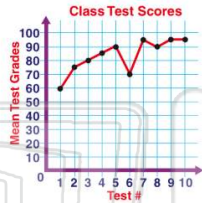




Name _____ Class _____ Date _____

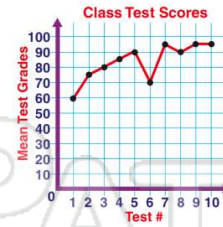
1 In this **line graph**, the test scores show a(n) _____ trend.

- A stable
- B upward
- C even
- D downward



2 The **mean** test grade for test #9 is _____.

- A 90
- B 91
- C 95
- D 99



3 The **mean** test grade for test #6 is _____ most of the others.

- A lower than
- B higher than



4 The **mean** test scores rise until test #5, for which the **mean** is 90%. Why might the **mean** test score for test #6 have dropped?

- A No one took the test.
- B The test was easy.



5




PREVIEW

Please [Sign In](#) or [Sign Up](#) to download the printable version of this worksheet

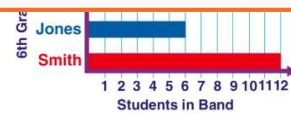
7

True or false?

- A true
- B false



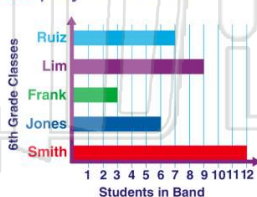
- C 11
- D 9



9

How many students from **Ruiz's and Lim's** classes play in the band?

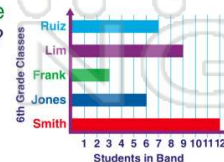
- A 7
- B 9
- C 16
- D 17



10

If the music teacher wants **50 band members** and all the 6th graders who play an instrument are currently in the band, does she have **all** the members she wants?

- A yes
- B no

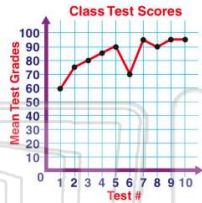




Name _____ Class _____ Date _____

1 In this **line graph**, the test scores show a(n) _____ trend.

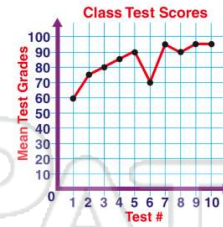
- A stable
- B upward
- C even
- D downward



(B)

2 The **mean** test grade for test #9 is _____.

- A 90
- B 91
- C 95
- D 99



(C)

3 The **mean** test grade for test #6 is _____ most of the others.

- A lower than
- B higher than



(A)

4 The **mean** test scores rise until test #5, for which the **mean** is 90%. Why might the **mean** test score for test #6 have dropped?

- A No one took the test.
- B The test was easy.



(C)

5



(A)


PREVIEW

Please [Sign In](#) or [Sign Up](#) to download the printable version of this worksheet


7

True or false?

- A true
- B false



- C 11
- D 9

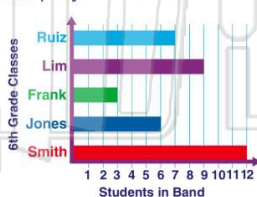


(D)

9

How many students from Ruiz's and Lim's classes play in the band?

- A 7
- B 9
- C 16
- D 17

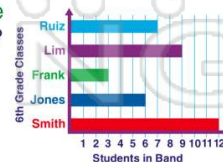


(C)

10

If the music teacher wants 50 band members and all the 6th graders who play an instrument are currently in the band, does she have **all** the members she wants?

- A yes
- B no



(B)