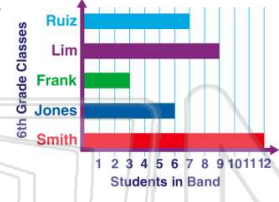




Name _____ Class _____ Date _____

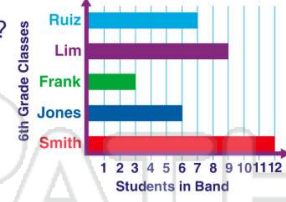
1 If **two more** of Jones's class members join the band, there will be _____ students from his class.

- A 6
- B 12
- C 9
- D 8



2 This graph indicates that **all but one** class has **5+** band members.

- True or false?
- A true
 - B false



3 A pictograph uses small pictures to represent a specific value. In this graph, what does the "cookie" shape represent?

- A a box of cookies
- B 5 cookies



4 How many cookies did Pam sell?

- A 7
- B 25
- C 5



5



PREVIEW

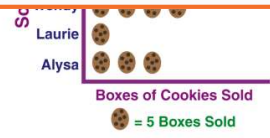
Please [Sign In](#) or [Sign Up](#) to download the printable version of this worksheet

7

- C 4
- D 3

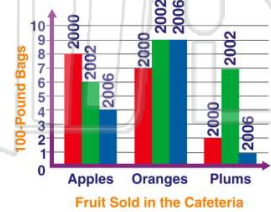


- B 2
- C 4
- D 1



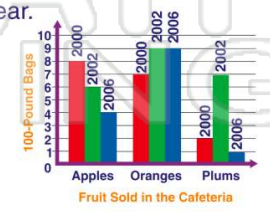
9 According to this graph, the cafeteria manager discovered that **only oranges** consistently sold well.

- True or false?
- A true
 - B false



10 According to this graph, the cafeteria manager found they sold **apples** each year.

- A more
- B fewer
- C no
- D the same amount of

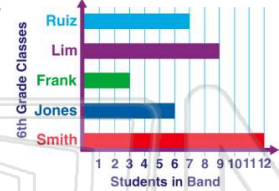




Name _____ Class _____ Date _____

1 If **two more** of Jones's class members join the band, there will be _____ students from his class.

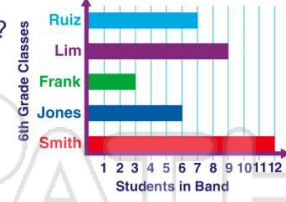
- A 6
- B 12
- C 9
- D 8



(D)

2 This graph indicates that **all but one** class has **5+** band members.

- True or false?
- A true
 - B false



(A)

3 A pictograph uses small pictures to represent a specific value. In this graph, what does the "cookie" shape represent?

- A a box of cookies
- B 5 cookies



(C)

4 How many cookies did Pam sell?

- A 7
- B 25
- C 5



(D)

5



(B)

PREVIEW

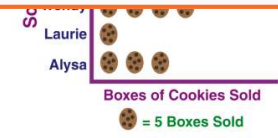
Please [Sign In](#) or [Sign Up](#) to download the printable version of this worksheet

(A)

- C 4
- D 3

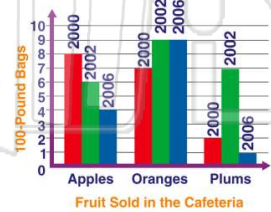


- B 2
- C 4
- D 1



9 According to this graph, the cafeteria manager discovered that **only oranges** consistently sold well.

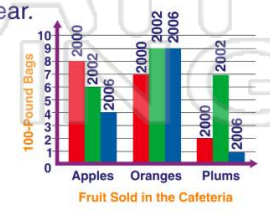
- True or false?
- A true
 - B false



(A)

10 According to this graph, the cafeteria manager found they sold **apples** each year.

- A more
- B fewer
- C no
- D the same amount of



(B)