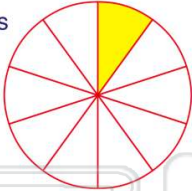




Name \_\_\_\_\_ Class \_\_\_\_\_ Date \_\_\_\_\_


1 Which number is **less than one tenth**?



A  $\frac{1}{9}$    B  $\frac{1}{8}$    C  $\frac{1}{5}$    D  $\frac{1}{12}$

2 Smallest to largest, which fraction would fill the space?

$\frac{1}{10}$  ?  $\frac{1}{5}$    Which is the missing fraction?



A  $\frac{6}{25}$    B  $\frac{7}{25}$    C  $\frac{1}{6}$    D  $\frac{1}{12}$

3 Which **sign** belongs between  $\frac{1}{2}$  and  $\frac{5}{8}$ ?

= < > ^



A 1 5   B 1 5

4 Which is **correct**?

A  $\frac{4}{10} = \frac{36}{100}$    C  $\frac{4}{10} < \frac{36}{100}$



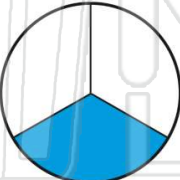
## PREVIEW

7 Please [Sign In](#) or [Sign Up](#) to download the printable version of this worksheet

- A  $\frac{4}{9} = \frac{3}{4}$    C  $\frac{4}{9} < \frac{3}{4}$   
 B  $\frac{4}{9} > \frac{3}{4}$    D  $\frac{4}{9} \wedge \frac{3}{4}$

- A  $\frac{9}{15}$    B  $\frac{5}{6}$    C  $\frac{8}{12}$    D  $\frac{3}{8}$


9 Which fraction is **greater than  $\frac{1}{3}$** ?



A  $\frac{1}{6}$    B  $\frac{2}{9}$    C  $\frac{5}{12}$    D  $\frac{2}{6}$

10 Smallest to largest, which fraction would fill the space?

$\frac{1}{3}$  ?  $\frac{5}{12}$   $\frac{4}{5}$    Which is the missing fraction?



A  $\frac{4}{9}$    B  $\frac{3}{8}$    C  $\frac{3}{4}$    D  $\frac{6}{7}$

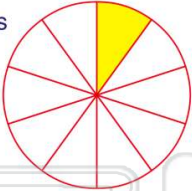


# Ordering Fractions

Math

Name \_\_\_\_\_ Class \_\_\_\_\_ Date \_\_\_\_\_

1 Which number is **less than one tenth**?




A  $\frac{1}{9}$    B  $\frac{1}{8}$    C  $\frac{1}{5}$    D  $\frac{1}{12}$

2 Smallest to largest, which fraction would fill the space?

$\frac{1}{10}$  ?  $\frac{1}{5}$

Which is the missing fraction?



A  $\frac{6}{25}$    B  $\frac{7}{25}$    C  $\frac{1}{6}$    D  $\frac{1}{12}$

3 Which **sign** belongs between  $\frac{1}{2}$  and  $\frac{5}{8}$ ?

= < > ^



A 1 5   B 1 5

4 Which is **correct**?

A  $\frac{4}{10} = \frac{36}{100}$    C  $\frac{4}{10} < \frac{36}{100}$



**PREVIEW**

Please [Sign In](#) or [Sign Up](#) to download the printable version of this worksheet

5

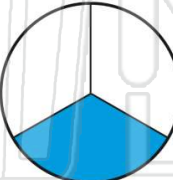
A  $\frac{4}{9} = \frac{3}{4}$    C  $\frac{4}{9} < \frac{3}{4}$

B  $\frac{4}{9} > \frac{3}{4}$    D  $\frac{4}{9} \wedge \frac{3}{4}$

6

A  $\frac{9}{15}$    B  $\frac{5}{6}$    C  $\frac{8}{12}$    D  $\frac{3}{8}$

9 Which fraction is **greater than  $\frac{1}{3}$** ?




A  $\frac{1}{6}$    B  $\frac{2}{9}$    C  $\frac{5}{12}$    D  $\frac{2}{6}$

10 Smallest to largest, which fraction would fill the space?

$\frac{1}{3}$  ?  $\frac{5}{12}$   $\frac{4}{5}$

Which is the missing fraction?



A  $\frac{4}{9}$    B  $\frac{3}{8}$    C  $\frac{3}{4}$    D  $\frac{6}{7}$