




Name _____ Class _____ Date _____

1

There are 80 questions on a test, and 52 are multiple choice.

What **percentage** is multiple choice?

- A 54%
- B 65%
- C 69%
- D 72%



2

Of the 100 children in the sixth grade class, 76 can go on the end-of-the-year field trip. What **percentage** of the children can go on the trip?

- A 66%
- B 67%
- C 76%
- D 77%



3

Fill in the blank.

3 is % of 20

- A 10



4

Fill in the blank.

150 is % of 375

- A 20

5



PREVIEW

Please [Sign In](#) or [Sign Up](#) to download the printable version of this worksheet

7

- B \$160.00
- C \$170.00
- D \$175.00



- B 2,640
- C 3,157
- D 4,435

9

Fill in the blank.

- A 283
- B 294
- C 305
- D 320



10

Marie goes to the clothing store. Her purchases equal \$89.25. The sales tax is 8%. **How much tax** does she pay?

- A \$7.14
- B \$7.86
- C \$71.40
- D \$78.60






Name _____ Class _____ Date _____

1 There are 80 questions on a test, and 52 are multiple choice. What **percentage** is multiple choice?

- A 54%
- B 65%
- C 69%
- D 72%



(B)

2 Of the 100 children in the sixth grade class, 76 can go on the end-of-the-year field trip. What **percentage** of the children can go on the trip?

- A 66%
- B 67%
- C 76%
- D 77%



(C)

3 Fill in the blank. **3** is % of **20**

- A 10



(B)

4 Fill in the blank. **150** is % of **375**

- A 20

(D)



PREVIEW

Please [Sign In](#) or [Sign Up](#) to download the printable version of this worksheet


7
B \$160.00
C \$170.00
D \$175.00



- B 2,640
- C 3,157
- D 4,435

(A)

9 Fill in the blank.
A 283
B 294
C 305
D 320



(D)

10 Marie goes to the clothing store. Her purchases equal \$89.25. The sales tax is 8%. **How much tax** does she pay?

- A \$7.14
- B \$7.86
- C \$71.40
- D \$78.60



(A)