



Name _____ Class _____ Date _____

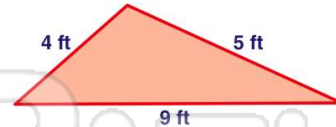
1 What is the **perimeter** of a rectangle with a length of **5 feet** and a width of **3 feet**?

- A 8 ft
- B 11 ft
- C 13 ft
- D 16 ft



2 What is the **perimeter** of the triangle shown?

- A 18 ft
- B 17 ft
- C 16 ft
- D 9 ft



3 A photograph measures **8 inches** on all sides. What is its **perimeter**?

- A 12 in.
- B 16 in.



4 A rectangular garden measures **6 feet** by **11 feet**. What is the **perimeter** of the garden?

- A 34 feet



PREVIEW

Please [Sign In](#) or [Sign Up](#) to download the printable version of this worksheet

7 **B** 25 in.
C 26 in.
D 29 in.



A 17 cm
B 28 cm
C 34 cm
D 42 cm

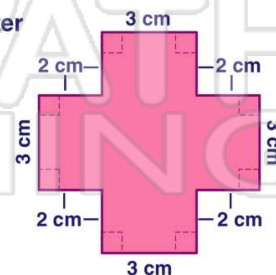
9 A plot of land has sides that measure **82 feet**, **104 feet**, **63 feet** and **78 feet**. What is the **perimeter** of the plot of land?

- A 227 feet
- B 249 feet
- C 317 feet
- D 327 feet



10 The **perimeter** around this polygon is _____ cm.


- A 28
- B 32
- C 84
- D 96





Name _____ Class _____ Date _____

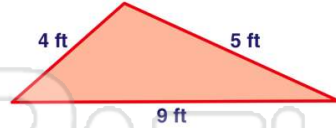
1 What is the **perimeter** of a rectangle with a length of **5 feet** and a width of **3 feet**?



A 8 ft
B 11 ft
C 13 ft
D 16 ft

(D)

2 What is the **perimeter** of the triangle shown?



A 18 ft
B 17 ft
C 16 ft
D 9 ft

(A)

3 A photograph measures **8 inches** on all sides. What is its **perimeter**?



A 12 in.
B 16 in.

(D)

4 A rectangular garden measures **6 feet** by **11 feet**. What is the **perimeter** of the garden?



A 34 feet

(A)




PREVIEW

Please [Sign In](#) or [Sign Up](#) to download the printable version of this worksheet

5

B 25 in.
C 26 in.
D 29 in.




(C)

A 17 cm
B 28 cm
C 34 cm
D 42 cm



(C)

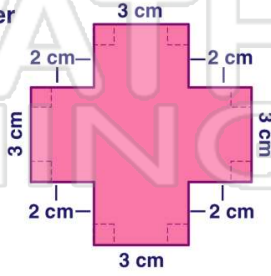
9 A plot of land has sides that measure **82 feet**, **104 feet**, **63 feet** and **78 feet**. What is the **perimeter** of the plot of land?



A 227 feet
B 249 feet
C 317 feet
D 327 feet

(D)

10 The **perimeter** around this polygon is _____ cm.



A 28
B 32
C 84
D 96

(A)