



Name \_\_\_\_\_ Class \_\_\_\_\_ Date \_\_\_\_\_

1 In which **quadrant** would the point  $(3,6)$  be located?

A A  
B B  
C C  
D D

2 In which **quadrant** would the point  $(-2,5)$  be located?

A A  
B B  
C C  
D D

3 In which **quadrant** would the point  $(-6,-3)$  be located?

A A  
B B

4 In which **quadrant** would the point  $(2,-6)$  be located?

A A  
B B

5



## PREVIEW

Please [Sign In](#) or [Sign Up](#) to download the printable version of this worksheet

7

A yes  
B no

A yes  
B no

9

Are points  $(6,-4)$  and  $(4,-6)$  be located in the same **quadrant**?

A yes  
B no

10

Are points  $(-2,-2)$  and  $(2,2)$  be located in the same **quadrant**?

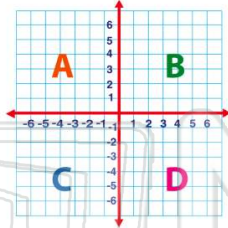
A yes  
B no



Name \_\_\_\_\_ Class \_\_\_\_\_ Date \_\_\_\_\_

1 In which **quadrant** would the point  $(3,6)$  be located?

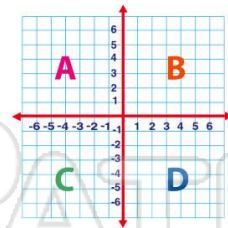
- A A
- B B
- C C
- D D



(B)

2 In which **quadrant** would the point  $(-2,5)$  be located?

- A A
- B B
- C C
- D D



(A)

3 In which **quadrant** would the point  $(-6,-3)$  be located?

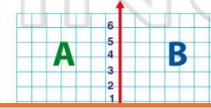
- A A
- B B



(C)

4 In which **quadrant** would the point  $(2,-6)$  be located?

- A A
- B B



(D)

5



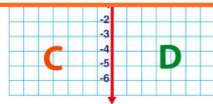
(D)

## PREVIEW

Please [Sign In](#) or [Sign Up](#) to download the printable version of this worksheet

7

- A yes
- B no



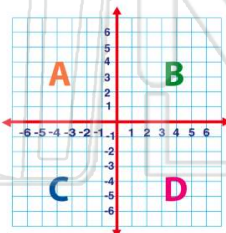
- A yes
- B no



(B)

9 Are points  $(6,-4)$  and  $(4,-6)$  be located in the same **quadrant**?

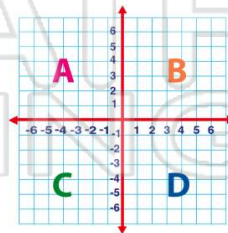
- A yes
- B no



(A)

10 Are points  $(-2,-2)$  and  $(2,2)$  be located in the same **quadrant**?

- A yes
- B no



(B)