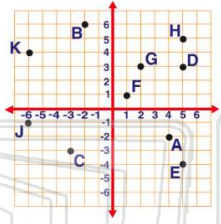




Name _____ Class _____ Date _____

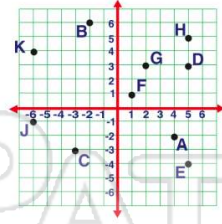
1 What are the **coordinates** for point A?

- A (5,3)
- B (4,-2)
- C (-6,-1)
- D (-6,4)



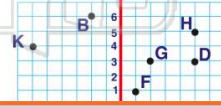
2 What are the **coordinates** for point B?

- A (-2,6)
- B (-3,-3)
- C (5,-4)
- D (5,5)



3 What are the **coordinates** for point C?

- A (-2,6)
- B (-3,-3)
- C (5,-4)



4 What are the **coordinates** for point D?

- A (5,3)
- B (4,-2)
- C (-6,-1)



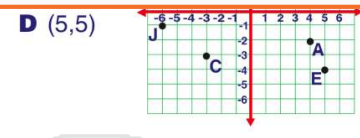
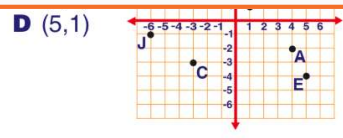
5



PREVIEW

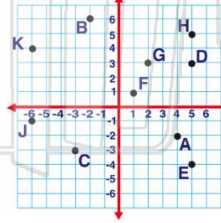
Please [Sign In](#) or [Sign Up](#) to download the printable version of this worksheet

7



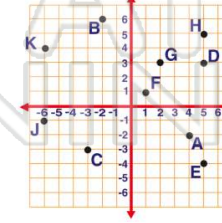
9 What are the **coordinates** for point J?

- A (-2,6)
- B (-3,-3)
- C (-6,-1)
- D (5,5)



10 What are the **coordinates** for point K?

- A (5,3)
- B (4,-2)
- C (-6,-1)
- D (-6,4)

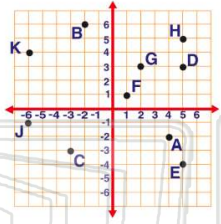




Name _____ Class _____ Date _____

1 What are the **coordinates** for point A?

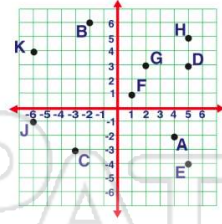
- A (5,3)
- B (4,-2)
- C (-6,-1)
- D (-6,4)



(B)

2 What are the **coordinates** for point B?

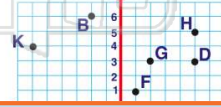
- A (-2,6)
- B (-3,-3)
- C (5,-4)
- D (5,5)



(A)

3 What are the **coordinates** for point C?

- A (-2,6)
- B (-3,-3)
- C (5,-4)



(B)

4 What are the **coordinates** for point D?

- A (5,3)
- B (4,-2)
- C (-6,-1)



(A)

5

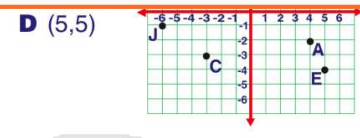
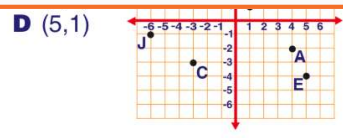


(A)

PREVIEW

Please [Sign In](#) or [Sign Up](#) to download the printable version of this worksheet

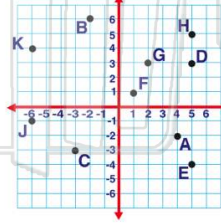
7



(D)

9 What are the **coordinates** for point J?

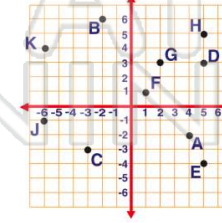
- A (-2,6)
- B (-3,-3)
- C (-6,-1)
- D (5,5)



(C)

10 What are the **coordinates** for point K?

- A (5,3)
- B (4,-2)
- C (-6,-1)
- D (-6,4)



(D)