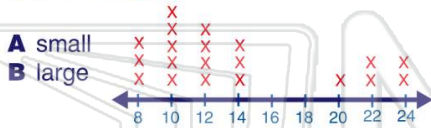


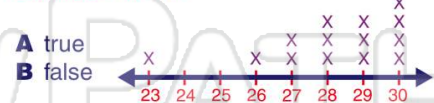


Name _____ Class _____ Date _____

- 1 The line plot shown represents the weights of dogs at an animal shelter. Based on the weights shown, would you say that **most** of the dogs are **small or large**?



- 2 At an amusement park, there is a ring toss game. The line plot shown represents the number of rings that were tossed before a prize was won. Based on the line plot, it can be said that **most people** need only 25 tosses to win.



- 3 The stem and leaf plot **correctly** represents the following data: 10, 15, 13, 12, 22, 24, 21, 26, 33, 36, 31.

Key: 2 | 4 = 24

Stem	Leaves
------	--------

- 4 A survey was taken to determine the ages that people were when they got married. The ages recorded were: 23, 27, 24, 19, 32, 28, 30, 18, 31, and 26. This stem and leaf plot **correctly** represents this data.

5



PREVIEW

7

Please [Sign In](#) or [Sign Up](#) to download the printable version of this worksheet

- A 72 C 83
B 75 D 90

8	9
7	2 5 5 9
8	1 3 3
9	0

- A 79
B 88
C 89
D 99

7	9
8	4 5 8 8 9
9	3 5 7 9

- 9 The stem and leaf plot shown represents the ages of passengers on a ferry. How old is the **oldest passenger**?

Key: 5 | 1 = 51

- A 11
B 56
C 58
D 69

Stem	Leaves
1	1 2 4 6
2	4 5 7
3	3 4
4	0 5 9
5	6 8

- 10 The stem and leaf plot shown represents the number of hours worked last week by a store's employees. How many employees worked **more than 40 hours**?

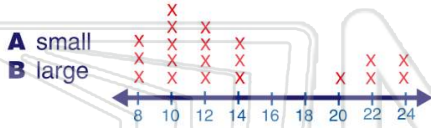
- A 2
B 5
C 3
D 4

Stem	Leaves
2	1 3 5
3	0 5
4	0 3 6
5	2 5



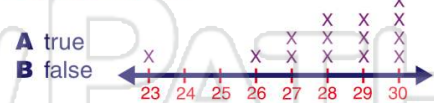
Name _____ Class _____ Date _____

- 1 The line plot shown represents the weights of dogs at an animal shelter. Based on the weights shown, would you say that **most** of the dogs are **small or large**?



(A)

- 2 At an amusement park, there is a ring toss game. The line plot shown represents the number of rings that were tossed before a prize was won. Based on the line plot, it can be said that **most people** need only 25 tosses to win.



(B)

- 3 The stem and leaf plot **correctly** represents the following data: 10, 15, 13, 12, 22, 24, 21, 26, 33, 36, 31.

Key: 2 | 4 = 24

Stem	Leaves
------	--------

(A)

- 4 A survey was taken to determine the ages that people were when they got married. The ages recorded were: 23, 27, 24, 19, 32, 28, 30, 18, 31, and 26. This stem and leaf plot **correctly** represents this data.

(B)

5



(A)

PREVIEW

Please [Sign In](#) or [Sign Up](#) to download the printable version of this worksheet

7

- A 72 C 83
B 75 D 90

6	9
7	2 5 5 9
8	1 3 3
9	0

- A 79
B 88
C 89
D 99

7	9
8	4 5 8 8 9
9	3 5 7 9

(D)

- 9 The stem and leaf plot shown represents the ages of passengers on a ferry. How old is the **oldest passenger**?

Key: 5 | 1 = 51

- A 11
B 56
C 58
D 69

Stem	Leaves
1	1 2 4 6
2	4 5 7
3	3 4
4	0 5 9
5	6 8

(C)

- 10 The stem and leaf plot shown represents the number of hours worked last week by a store's employees. How many employees worked **more than 40 hours**?

- A 2
B 5
C 3
D 4

Stem	Leaves
2	1 3 5
3	0 5
4	0 3 6
5	2 5

(D)