



Name _____ Class _____ Date _____

- 1 Based on the **spreadsheet** shown, what activity took place on **June 15**?

Date	Beginning Balance	Deposit/Withdrawal	Ending Balance
6/13/2006	\$304.00	check # 124 for \$83	\$221.00
6/15/2006	\$221.00	paycheck \$189.00	\$410.00
6/18/2006	\$410.00	ATM \$100.00	\$310.00

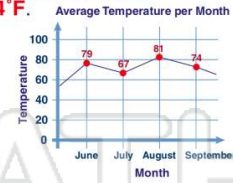
- A a deposit
 B a withdrawal by check
 C none
 D a withdrawal by ATM

- 2 This line graph shows the average temperature per month in the summer of 1999 to be **June 67°F, July 79°F, Aug. 81°F, Sept. 74°F**.

The line chart displayed from this data is correct.

True or false?

- A true B false



- 3 A **spreadsheet** shows the number of MP3 players purchased each year per 100 households. Based on the **bar graph** shown of the data, what would be a reasonable prediction for MP3



- 4 Based on the **line graph** shown, in what year did the amount of hot dogs eaten **decrease**?

- A 1999



5

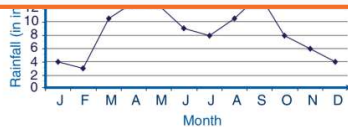


PREVIEW

Please [Sign In](#) or [Sign Up](#) to download the printable version of this worksheet

7

- B 5
 C 4
 D 7



2001 than 2002.

- B Less DVDs were sold in 2001 than 2004.
 C DVD sales are increasing.
 D DVD sales are decreasing.



- 9 A **scatter plot** is a **straight line** that represents a relationship between **two quantities**.

True or false?

- A true
 B false

- 10 Based on the **scatter plot** shown, which point is **not** in the scatter plot?

- A (1,2)
 B (4,3)
 C (3,4)
 D (2,5)





Name _____ Class _____ Date _____

1 Based on the **spreadsheet** shown, what activity took place on **June 15**?

Date	Beginning Balance	Deposit/Withdrawal	Ending Balance
6/13/2006	\$304.00	check # 124 for \$83	\$221.00
6/15/2006	\$221.00	paycheck \$189.00	\$410.00
6/18/2006	\$410.00	ATM \$100.00	\$310.00

- A a deposit
- B a withdrawal by check
- C none
- D a withdrawal by ATM

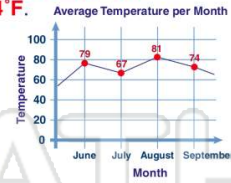
(A)

2 This line graph shows the average temperature per month in the summer of 1999 to be **June 67°F, July 79°F, Aug. 81°F, Sept. 74°F**.

The line chart displayed from this data is correct.

True or false?

- A true
- B false



(B)

3 A **spreadsheet** shows the number of MP3 players purchased each year per 100 households. Based on the **bar graph** shown of the data, what would be a reasonable prediction for MP3



(D)

4 Based on the **line graph** shown, in what year did the amount of hot dogs eaten **decrease**?

- A 1999



(B)

5



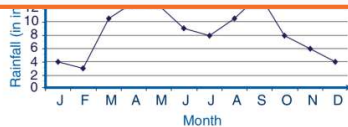
(A)

PREVIEW

Please [Sign In](#) or [Sign Up](#) to download the printable version of this worksheet

7

- B 5
- C 4
- D 7



2001 than 2002.

- B Less DVDs were sold in 2001 than 2004.
- C DVD sales are increasing.
- D DVD sales are decreasing.



(D)

9

A **scatter plot** is a **straight line** that represents a relationship between **two quantities**.


True or false?

- A true
- B false

(B)

10 Based on the **scatter plot** shown, which point is **not** in the scatter plot?

- A (1,2)
- B (4,3)
- C (3,4)
- D (2,5)



(C)