

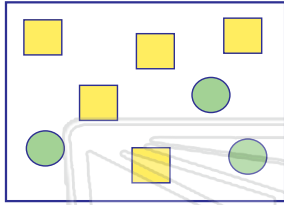


# Numerical & Geometric Proportions

Math

Name \_\_\_\_\_ Class \_\_\_\_\_ Date \_\_\_\_\_

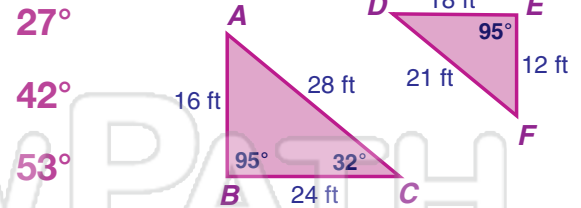
1 What is the **ratio** of **squares to circles** in the figure shown? Circle the answer.



- $\frac{3}{5}$
- $\frac{5}{3}$
- $\frac{5}{8}$

2 There are two animal hospitals. At hospital A, there are 8 dogs and 6 cats. At hospital B, there are 12 dogs and 14 cats. What is the **ratio of cats** at hospital A compared to hospital B?

6 The triangles shown are **similar**. What is the measure of  $\angle DFE$ ? Circle it.



- 27°
- 42°
- 53°

7 Given the **similar** polygons shown, which **side corresponds to side DF**?



- EF
- BC

3  
4 ft



## PREVIEW

Please [Sign In](#) or [Sign Up](#) to download the printable version of this worksheet

5 Lindsey is building a model of her house. She wants to use the **ratio of 1 inch for every 5 feet**. If her house is 35 feet tall, which **proportion** should she use to get the **height** of her model? Check the answer.

- $1/35 = x/5$
- $1/5 = x/35$
- $x/5 = 35/1$
- $35/5 = 1/x$

10 Two flat screen TVs are **similar** as shown. What is the **length** of the larger TV?

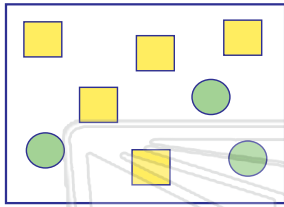


- 19 in.    40 in.
- 31 in.    42 in.



Name \_\_\_\_\_ Class \_\_\_\_\_ Date \_\_\_\_\_

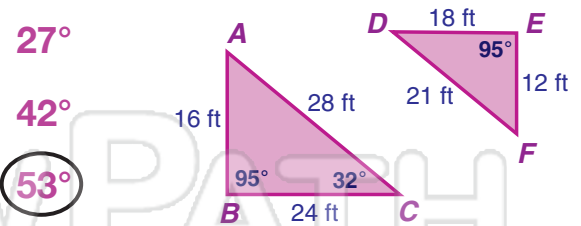
- 1 What is the **ratio** of **squares to circles** in the figure shown? Circle the answer.



$\frac{3}{5}$     $\frac{5}{3}$     $\frac{5}{8}$

- 2 There are two animal hospitals. At hospital A, there are 8 dogs and 6 cats. At hospital B, there are 12 dogs and 14 cats. What is the **ratio of cats** at hospital A compared to hospital B?

- 6 The triangles shown are **similar**. What is the measure of  $\angle DFE$ ? Circle it.



27°  
42°  
53°

- 7 Given the **similar** polygons shown, which **side corresponds to side DF**?



EF   **BC**

- 3  
4 ft



## PREVIEW

Please [Sign In](#) or [Sign Up](#) to download the printable version of this worksheet

- 4  
 $\frac{63}{14} = 63 \text{ mph}$

- 5 Lindsey is building a model of her house. She wants to use the **ratio of 1 inch for every 5 feet**. If her house is 35 feet tall, which **proportion** should she use to get the **height** of her model? Check the answer.

$\frac{1}{35} = \frac{x}{5}$      $\frac{1}{5} = \frac{x}{35}$   
  $\frac{x}{5} = \frac{35}{1}$      $\frac{35}{5} = \frac{1}{x}$

- 10 Two flat screen TVs are **similar** as shown. What is the **length** of the larger TV?

19 in.   40 in.   **42 in.**  
31 in.

