



Name _____ Class _____ Date _____


1 What is the **mean** of the following numbers?

-12, 14, 18, -22, 16, -11, 13, 9, -8, -6

A -1.7
B -1.5
C 1.1
D 12.9

2 Which **measure of central tendency** would best represent the weight of **all** of the members of the high school football team?

A mean
B median
C mode
D range



3 Which **measure of central tendency** would best be used to represent the data shown on the bar graph of the number of stuffed animals owned by 3 to 8-year-olds?

4 Which is **true** about the following data?

22, 18, 21, 17, 16, 12, 21, 14, 25

A The mean and mode are 21

Stuffed Animals per Age

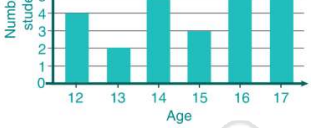


PREVIEW

Please [Sign In](#) or [Sign Up](#) to download the printable version of this worksheet

5

C 16
D 17



Age	Number of Stuffed Animals
12	4
13	2
14	4
15	3
16	4
17	4

A mean
B mode
C median
D range

Month	J	F	M	A	M	J	J	A	S	O	N	D
# books (in thousands)	4.8	3.3	3.1	3	2.7	2.5	2	2.9	3.7	5	5.5	6

9 **Variability** indicates whether data is spread out or clustered together.

True or false?

A true
B false

10 What is the **range** of the following data?

78, 67, 82, 85, 77, 97, 94, 69, 89, 91, 73

A 5
B 24
C 30
D 82



Name _____ Class _____ Date _____

1 What is the **mean** of the following numbers?

-12, 14, 18, -22, 16, -11, 13, 9, -8, -6

A -1.7
B -1.5
C 1.1
D 12.9

C

2 Which **measure of central tendency** would best represent the weight of **all** of the members of the high school football team?

A mean
B median
C mode
D range



A

3 Which **measure of central tendency** would best be used to represent the data shown on the bar graph of the number of stuffed animals owned by 3 to 8-year-olds?

Stuffed Animals per Age

C

4 Which is **true** about the following data?

22, 18, 21, 17, 16, 12, 21, 14, 25

A The mean and mode are 21

D



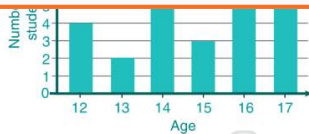
B

PREVIEW

7 Please [Sign In](#) or [Sign Up](#) to download the printable version of this worksheet

B

C 16
D 17



A mean
B mode
C median
D range

Month	J	F	M	A	M	J	J	A	S	O	N	D
# books (in thousands)	4.8	3.3	3.1	3	2.7	2.5	2	2.9	3.7	5	5.5	6

9 **Variability** indicates whether data is spread out or clustered together.

True or false?

A true
B false

A

10 What is the **range** of the following data?

78, 67, 82, 85, 77, 97, 94, 69, 89, 91, 73

A 5
B 24
C 30
D 82

C