



Name \_\_\_\_\_ Class \_\_\_\_\_ Date \_\_\_\_\_

1 With a **line plot**, data is displayed with each X above a number to represent a quantity of ten.

True or false?

- A true
- B false

2 The data, **33, 44, 72, 37, 42, 56, 81, 64, 62, 79, 36, 48, 52, 43, 51, 66, 58, 76, 34, 43**, represents the ages of adults in a sample of town population. The best way to display this data would be with a \_\_\_\_\_.

- A line plot
- B circle graph
- C pictogram
- D histogram

3 The **line plot** shown displays the data for the number of cell phones per household. What can be concluded from the results?



4 Based on the **circle graph** shown, what percentage of people like to go camping?

- A 17%

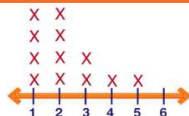


## PREVIEW

Please [Sign In](#) or [Sign Up](#) to download the printable version of this worksheet

7

- A 1
- B 2
- C 3
- D 3.5



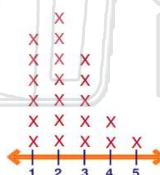
- B 6
- C 6.1
- D 7



9 Based on the **line plot** showing how many times a person sneezes in a row, most people sneeze twice in a row.

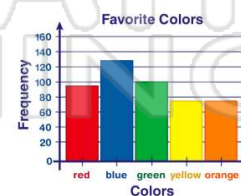
True or false?

- A true
- B false



10 Based on the **bar graph** of favorite colors, what is the **second favorite color**?

- A red
- B blue
- C green
- D yellow



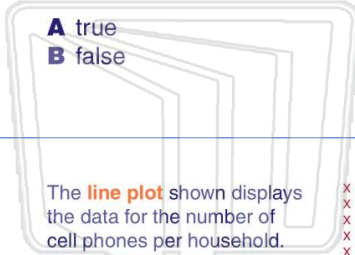


Name \_\_\_\_\_ Class \_\_\_\_\_ Date \_\_\_\_\_

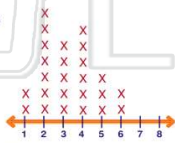
1 With a **line plot**, data is displayed with each X above a number to represent a quantity of ten.

True or false?

- A true
- B false



3 The **line plot** shown displays the data for the number of cell phones per household. What can be concluded from the results?



2 The data, **33, 44, 72, 37, 42, 56, 81, 64, 62, 79, 36, 48, 52, 43, 51, 66, 58, 76, 34, 43**, represents the ages of adults in a sample of town population. The best way to display this data would be with a \_\_\_\_\_.

- A line plot
- B circle graph
- C pictogram
- D histogram

4 Based on the **circle graph** shown, what percentage of people like to **go camping**?



- A 17%

5

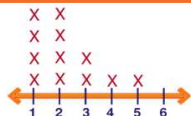


## PREVIEW

Please [Sign In](#) or [Sign Up](#) to download the printable version of this worksheet

7

- A 1
- B 2
- C 3
- D 3.5



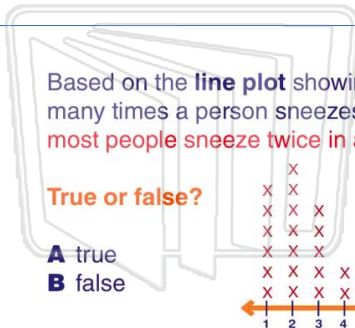
- B 6
- C 6.1
- D 7



9 Based on the **line plot** showing how many times a person sneezes in a row, most people sneeze twice in a row.

True or false?

- A true
- B false



10 Based on the **bar graph** of favorite colors, what is the **second favorite color**?

- A red
- B blue
- C green
- D yellow

