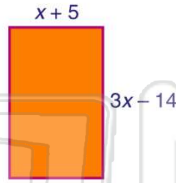




Name _____ Class _____ Date _____

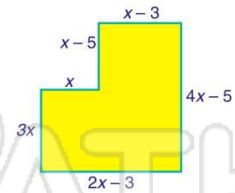
1 What is the **perimeter** of the rectangle shown in terms of x ?

- A $4x - 9$
- B $4x - 19$
- C $8x - 18$
- D $8x - 38$



2 What is the **perimeter** of the figure shown in terms of x ?

- A $10x - 8$
- B $12x - 16$
- C $11x - 11$
- D $10x - 13$




3 If the perimeter of the rectangle shown is **57 cm**, what is the **height**?

- A .5 cm
- B 6.5 cm

$4x + 2$

4 If the perimeter of the figure shown is **119 cm**, how long is **side BC**?

- A 8 cm
- B 13 cm



5



PREVIEW

Please [Sign In](#) or [Sign Up](#) to download the printable version of this worksheet

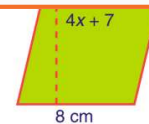
7

- A 6 cm
- B 7 cm
- C 8 cm
- D 18 cm

$5x - 12$

7 cm

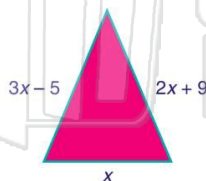
- A 8 cm
- B 13 cm
- C 19 cm
- D 23 cm



9

What is the **perimeter** of the triangle shown in terms of x ?

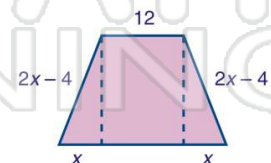
- A $5x - 4$
- B $5x + 4$
- C $6x - 4$
- D $6x + 4$



10

What is the **perimeter** of the figure shown in terms of x ?

- A $6x + 16$
- B $6x + 4$
- C $6x + 32$
- D $6x + 8$

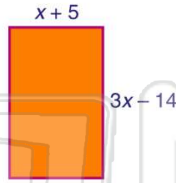




Name _____ Class _____ Date _____

1 What is the **perimeter** of the rectangle shown in terms of x ?

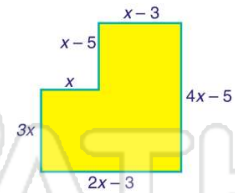
- A $4x - 9$
- B $4x - 19$
- C $8x - 18$
- D $8x - 38$



(C)

2 What is the **perimeter** of the figure shown in terms of x ?

- A $10x - 8$
- B $12x - 16$
- C $11x - 11$
- D $10x - 13$



(B)

3 If the perimeter of the rectangle shown is **57 cm**, what is the **height**?


- A .5 cm
- B 6.5 cm

$4x + 2$

(A)

4 If the perimeter of the figure shown is **119 cm**, how long is **side BC**?

- A 8 cm
- B 13 cm



(D)



PREVIEW

Please [Sign In](#) or [Sign Up](#) to download the printable version of this worksheet

7

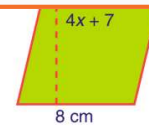
- A 6 cm
- B 7 cm
- C 8 cm
- D 18 cm

$5x - 12$

7 cm

(C)

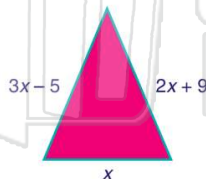
- A 8 cm
- B 13 cm
- C 19 cm
- D 23 cm



(C)

9 What is the **perimeter** of the triangle shown in terms of x ?

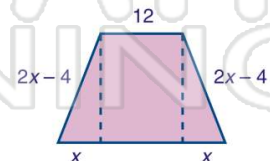
- A $5x - 4$
- B $5x + 4$
- C $6x - 4$
- D $6x + 4$



(D)

10 What is the **perimeter** of the figure shown in terms of x ?

- A $6x + 16$
- B $6x + 4$
- C $6x + 32$
- D $6x + 8$



(A)