

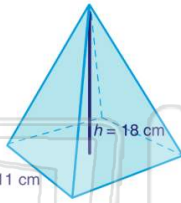


Name \_\_\_\_\_ Class \_\_\_\_\_ Date \_\_\_\_\_

1 What is the **volume** of the pyramid shown?

$$V = \frac{1}{3} b^2 h$$

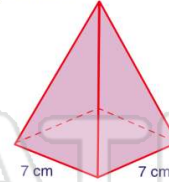
- A 66 cm<sup>3</sup>
- B 726 cm<sup>3</sup>
- C 1,089 cm<sup>3</sup>
- D 2,178 cm<sup>3</sup>



2 If a pyramid has a **volume** of **343 cm<sup>3</sup>** and a **base** of **7 cm x 7 cm**, what is the **height** of the pyramid?

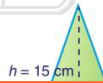
$$V = \frac{1}{3} b^2 h$$

- A 7 cm
- B 18 cm
- C 21 cm
- D 24 cm



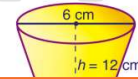
3 What is the **volume** to the nearest tenth of the cone shown?

$$V = \frac{1}{3} \pi r^2 h$$



4 What is the amount of ice cream that can fit in the cone shown to the **nearest hundredth**?

$$V = \frac{1}{3} \pi r^2 h$$



5

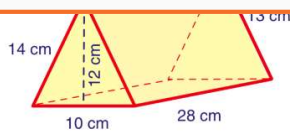


## PREVIEW

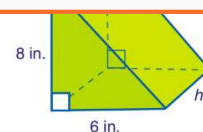
Please [Sign In](#) or [Sign Up](#) to download the printable version of this worksheet

7

- A 1,156 cm
- B 1,166 cm
- C 1,176 cm
- D 1,276 cm



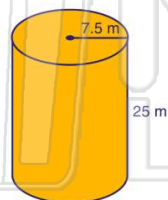
- A 7 in.
- B 6 in.
- C 5 in.
- D 4 in.



9 What is the **surface area** of the cylinder shown?

$$SA = 2\pi r^2 + 2\pi rh$$

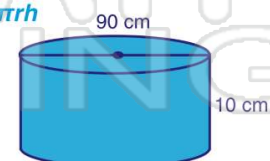
- A 588.75 m
- B 1,203.05 m
- C 1,318.8 m
- D 1,530.75 m



10 What is the **surface area** of the cylinder shown?

$$SA = 2\pi r^2 + 2\pi rh$$

- A 3,108.6 cm
- B 3,391.2 cm
- C 15,543 cm
- D 53,694 cm



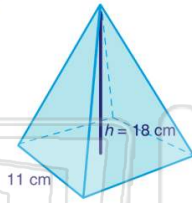


Name \_\_\_\_\_ Class \_\_\_\_\_ Date \_\_\_\_\_

1 What is the **volume** of the pyramid shown?

$$V = \frac{1}{3} b^2 h$$

- A 66 cm<sup>3</sup>
- B 726 cm<sup>3</sup>
- C 1,089 cm<sup>3</sup>
- D 2,178 cm<sup>3</sup>

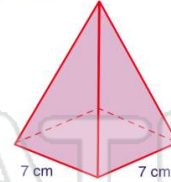


(B)

2 If a pyramid has a **volume** of 343 cm<sup>3</sup> and a **base** of 7 cm x 7 cm, what is the **height** of the pyramid?

$$V = \frac{1}{3} b^2 h$$

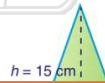
- A 7 cm
- B 18 cm
- C 21 cm
- D 24 cm



(C)

3 What is the **volume** to the nearest tenth of the cone shown?

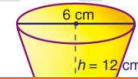
$$V = \frac{1}{3} \pi r^2 h$$



(C)

4 What is the amount of ice cream that can fit in the cone shown to the **nearest hundredth**?

$$V = \frac{1}{3} \pi r^2 h$$



(B)

5



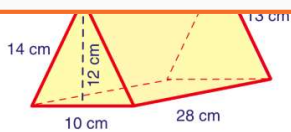
(D)

## PREVIEW

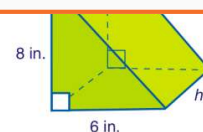
Please [Sign In](#) or [Sign Up](#) to download the printable version of this worksheet

7

- A 1,156 cm
- B 1,166 cm
- C 1,176 cm
- D 1,276 cm



- A 7 in.
- B 6 in.
- C 5 in.
- D 4 in.

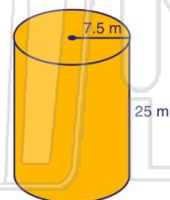


(D)

9 What is the **surface area** of the cylinder shown?

$$SA = 2\pi r^2 + 2\pi rh$$

- A 588.75 m
- B 1,203.05 m
- C 1,318.8 m
- D 1,530.75 m

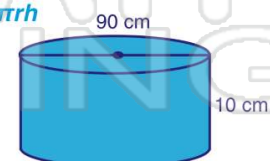


(D)

10 What is the **surface area** of the cylinder shown?

$$SA = 2\pi r^2 + 2\pi rh$$

- A 3,108.6 cm
- B 3,391.2 cm
- C 15,543 cm
- D 53,694 cm



(C)