

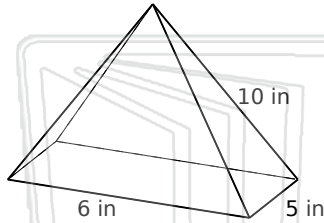


Surface Area and Volume

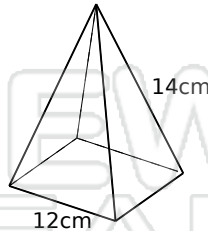
Math

Name _____ Class _____ Date _____

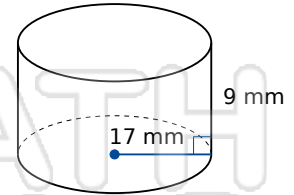
Find the surface area and volume of each figure.
Round answers to the nearest hundredth, if necessary.



Surface Area: _____
Volume: _____



Surface Area: _____
Volume: _____



Surface Area: _____
Volume: _____



Surface
Volume

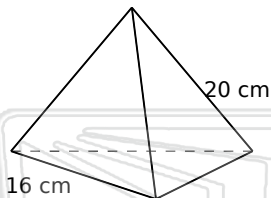
in

PREVIEW

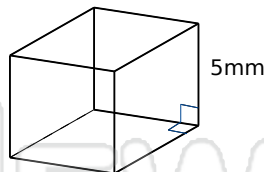
Please [Sign In](#) or [Sign Up](#) to download
the printable version of this worksheet

Surface
Volume

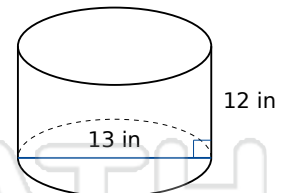
in



Surface Area: _____
Volume: _____



Surface Area: _____
Volume: _____



Surface Area: _____
Volume: _____

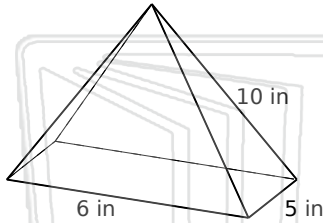


Surface Area and Volume - Answer Key

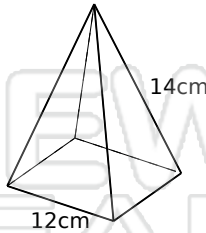
Math

Name _____ Class _____ Date _____

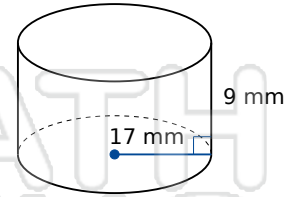
Find the surface area and volume of each figure.
Round answers to the nearest hundredth, if necessary.



Surface Area: 132.31 in²
Volume: 53.68 in³



Surface Area: 447.58 cm²
Volume: 392.9 cm³

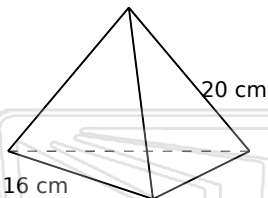


Surface Area: 2777.17 mm²
Volume: 8171.28 mm³

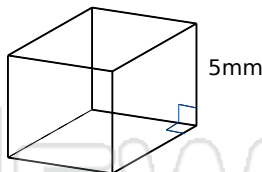


PREVIEW

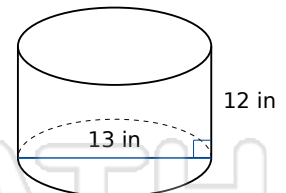
Please [Sign In](#) or [Sign Up](#) to download
the printable version of this worksheet



Surface Area: 518.14 cm²
Volume: 407.01 cm³



Surface Area: 150 mm²
Volume: 125 mm³



Surface Area: 755.55 in²
Volume: 1592.79 in³