

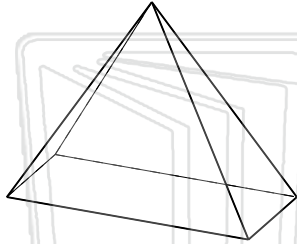


Identify Solid Figures

Math

Name _____ Class _____ Date _____

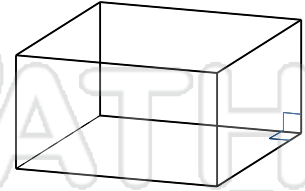
Identify Each Solid Figure.



Type: _____



Type: _____



Type: _____

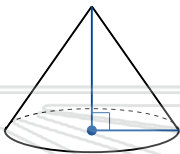


Type

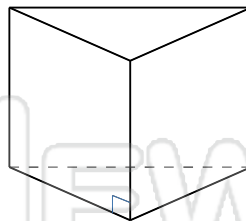
PREVIEW

Please [Sign In](#) or [Sign Up](#) to download the printable version of this worksheet

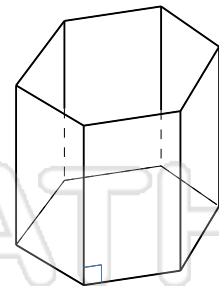
Type



Type: _____



Type: _____



Type: _____

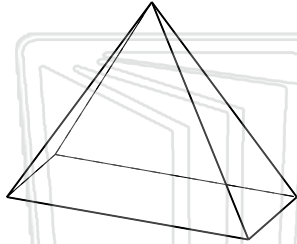


Identify Solid Figures - Answer Key

Math

Name _____ Class _____ Date _____

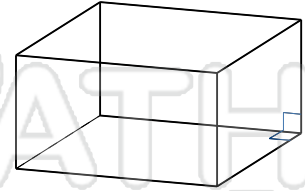
Identify Each Solid Figure.



Type: Rectangular Pyramid



Type: Pentagonal Pyramid



Type: Rectangular Prism

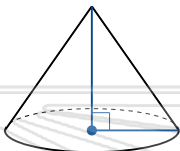


Type

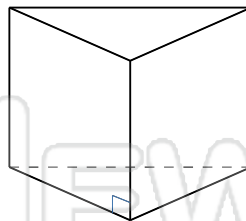
PREVIEW

Please [Sign In](#) or [Sign Up](#) to download the printable version of this worksheet

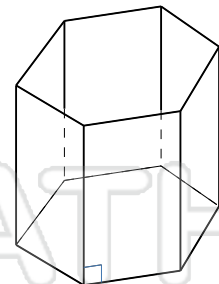
Type



Type: Cone



Type: Triangular Prism



Type: Hexagonal Prism