

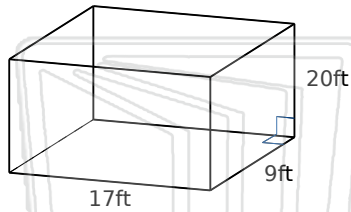


Surface Area of Solid Figures

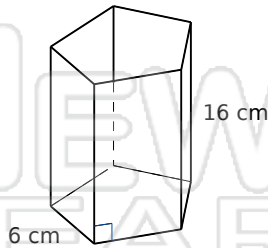
Math

Name _____ Class _____ Date _____

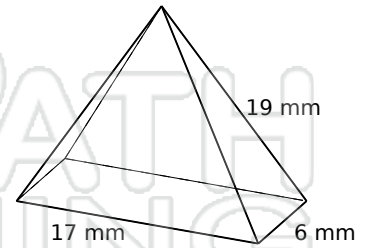
Find the surface area of each figure.
Round answers to the nearest hundredth, if necessary.



Surface Area: _____



Surface Area: _____



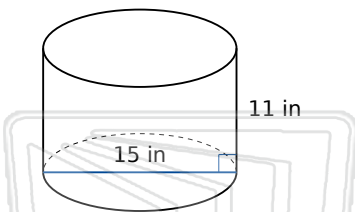
Surface Area: _____

Surface _____

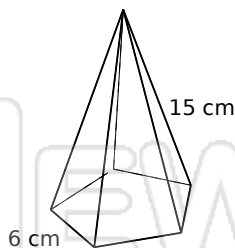
Surface _____

Surface _____

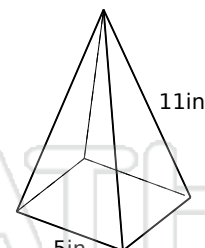
Surface _____



Surface Area: _____



Surface Area: _____



Surface Area: _____

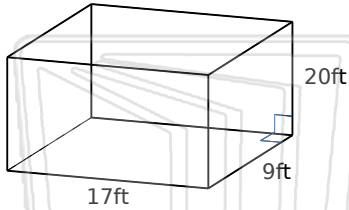


Surface Area of Solid Figures - Answer Key

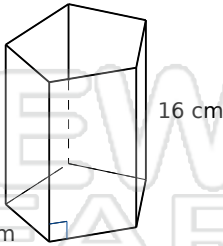


Name _____ Class _____ Date _____

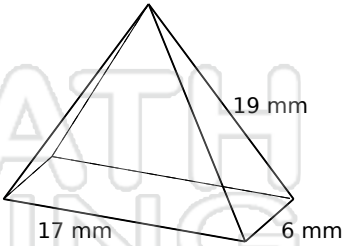
Find the surface area of each figure.
Round answers to the nearest hundredth, if necessary.



Surface Area: 1346 ft²



Surface Area: 603.87 cm²



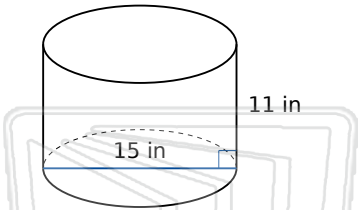
Surface Area: 453.8 mm²

Surface _____

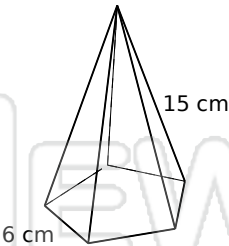
Surface _____

Surface _____

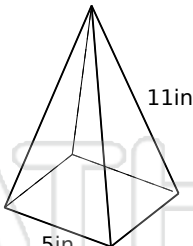
Surface _____



Surface Area: 871.79 in²



Surface Area: 282.39 cm²



Surface Area: 132.12 in²