

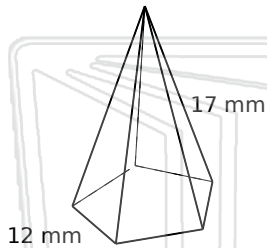


# Volume of Solid Figures

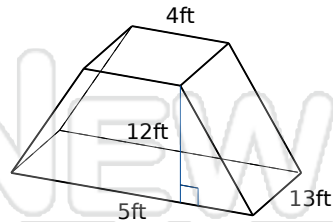
Math

Name \_\_\_\_\_ Class \_\_\_\_\_ Date \_\_\_\_\_

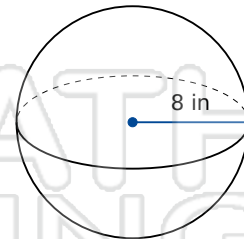
Find the volume of each figure.  
Round answers to the nearest hundredth, if necessary.



Volume: \_\_\_\_\_



Volume: \_\_\_\_\_

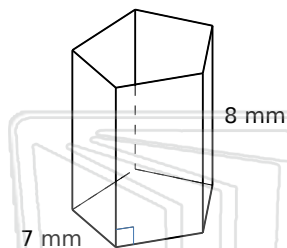


Volume: \_\_\_\_\_

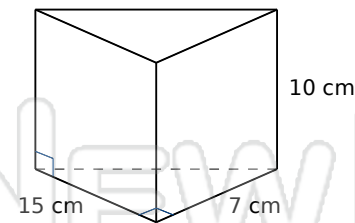


## PREVIEW

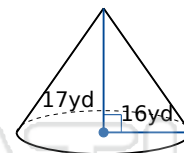
Please [Sign In](#) or [Sign Up](#) to download the printable version of this worksheet



Volume: \_\_\_\_\_



Volume: \_\_\_\_\_



Volume: \_\_\_\_\_

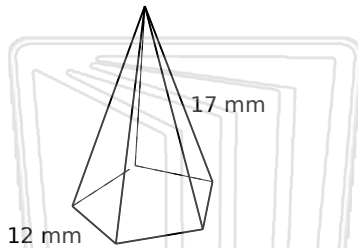


# Volume of Solid Figures - Answer Key

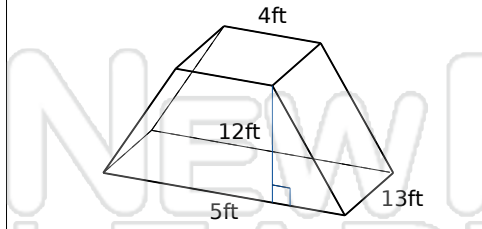
Math

Name \_\_\_\_\_ Class \_\_\_\_\_ Date \_\_\_\_\_

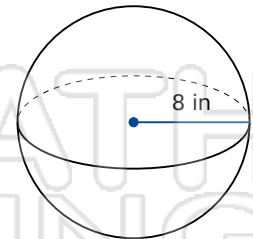
Find the volume of each figure.  
Round answers to the nearest hundredth, if necessary.



Volume: 818.78 mm<sup>3</sup>



Volume: 702 ft<sup>3</sup>

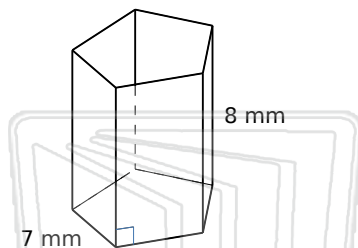


Volume: 2144.66 in<sup>3</sup>

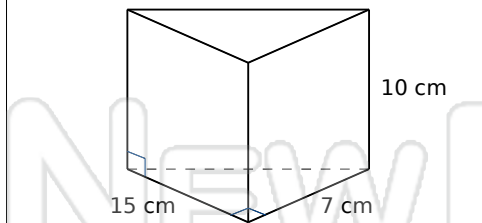


## PREVIEW

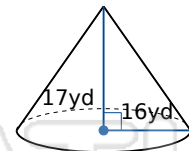
Please [Sign In](#) or [Sign Up](#) to download the printable version of this worksheet



Volume: 674.43 mm<sup>3</sup>



Volume: 525 cm<sup>3</sup>



Volume: 4557.4 yd<sup>3</sup>