



Name _____

Date _____

1 hour is _____ minutes.

Half an hour is _____ minutes.

It takes me 1 hour to _____.


It takes me half an hour to _____.

Half past 3 means _____.

_____ is another way of saying half past 3.

Show the times on each clock.

YOU NEED:
a clock



PREVIEW

Please [Sign In](#) or [Sign Up](#) to download the printable version of this worksheet

Mrs Gold has 2 fish bowls.
She wants to put half of these things into each bowl.

Each bowl has:

_____ fish

_____ rocks

_____ snails

_____ shells

_____ plants

18 fish



20 rocks



10 snails



30 shells



14 plants





Name _____

1 hour is 60 minutes.

Half an hour is 30 minutes.

It takes me **1** hour to _____.

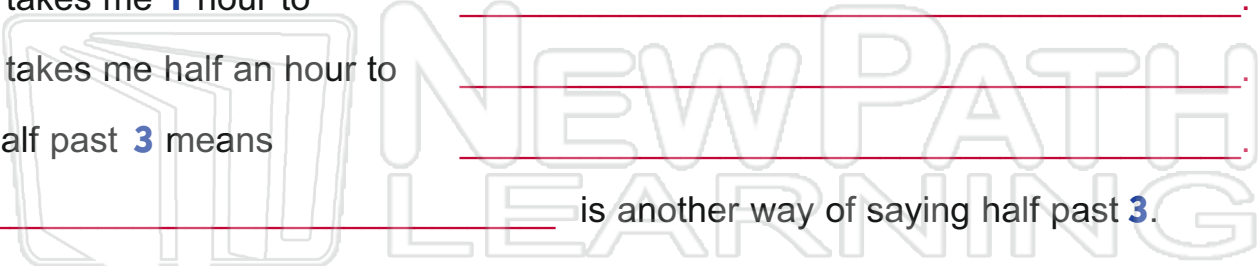

It takes me half an hour to _____.

Half past **3** means _____.

_____ is another way of saying half past **3**.

Show the times on each clock.

YOU NEED:
a clock



PREVIEW

Please [Sign In](#) or [Sign Up](#) to download the printable version of this worksheet



10 6 3

Mrs Gold has **2** fish bowls.
She wants to put half of these things into each bowl.

Each bowl has:

9 fish

10 rocks

5 snails

15 shells

7 plants

18 fish

20 rocks

10 snails

30 shells

14 plants

