



Name \_\_\_\_\_

Date \_\_\_\_\_

Time

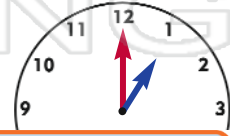
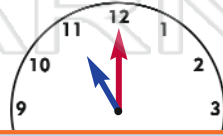
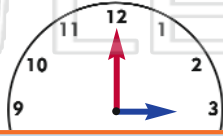
Write a number to show each o'clock time.



\_\_\_\_\_ o'clock

\_\_\_\_\_ o'clock

\_\_\_\_\_ o'clock



NEW PATH LEARNING

**PREVIEW**

Please [Sign In](#) or [Sign Up](#) to download the printable version of this worksheet

Day: \_\_\_\_\_

Friday

Thursday

Wednesday

Tuesday

Monday



happens on these days.



Name \_\_\_\_\_

Date \_\_\_\_\_

answer key

Time

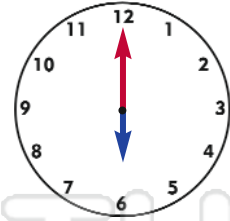
Write a number to show each o'clock time.



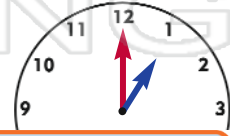
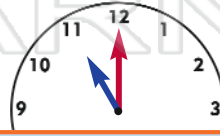
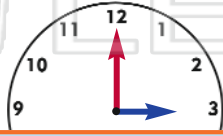
9 o'clock



2 o'clock



6 o'clock



**PREVIEW**

Please [Sign In](#) or [Sign Up](#) to download the printable version of this worksheet

Day:

Friday

Thursday

Wednesday

Tuesday

Monday

happens on these days.

