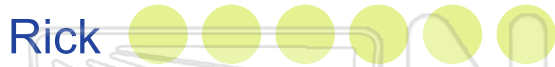




Name _____

Date _____


Age in Years



How old are these children?

How many people are shown in this graph? _____

Who is the **oldest**?



PREVIEW

Please [Sign In](#) or [Sign Up](#) to download the printable version of this worksheet



Shane

Kayla

Sue has _____ pencils.

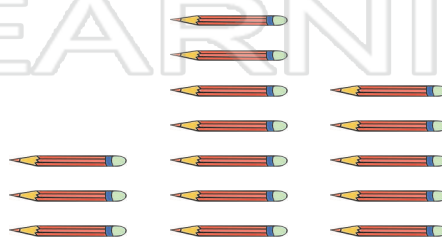
Lou has _____ pencils.

_____ has the **most**.

_____ has the **least**.

Tim has _____ more than Sue.

Tim has _____ pencils.



Sue	Tim	Lou
-----	-----	-----



Name _____

Date _____

Age in Years



How old are these children?



How many people are shown in this graph? 4

Who is the **oldest**? Natalia

PREVIEW

Please [Sign In](#) or [Sign Up](#) to download the printable version of this worksheet

	Shane								
	Kayla								

Sue has 3 pencils.

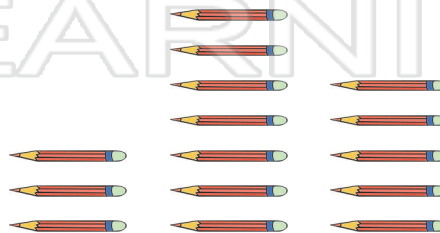
Lou has 5 pencils.

Tim has the **most**.

Sue has the **least**.

Tim has 4 more more than Sue.

Tim has 7 pencils.



Sue	Tim	Lou
------------	------------	------------