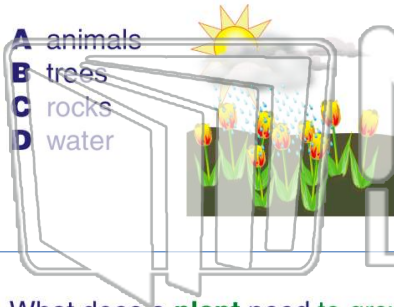




Name _____ Class _____ Date _____


1 Plants need _____ to grow.

- A animals
- B trees
- C rocks
- D water



2 How do plants get water?

- A from the rain
- B from trees
- C from grass
- D from rocks



3 What does a plant need to grow?

- A air



4 What needs sunlight to grow?

- A animals



5



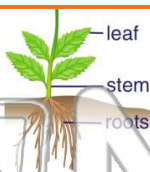
PREVIEW

Please [Sign In](#) or [Sign Up](#) to download the printable version of this worksheet

7

come from:

- A the roots of a plant
- B the stem of a plant
- C the flower of a plant
- D the leaves of a plant



or it:

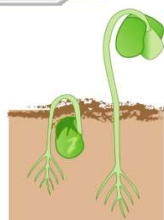
- A a tiny plant
- B soil
- C water
- D flower petals



9

The roots grow _____.

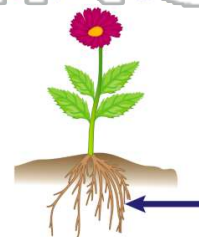
- A above the soil
- B toward the sky
- C into the soil
- D toward the Sun



10

What is the arrow pointing to?

- A the flower
- B the roots
- C the leaves
- D the stem

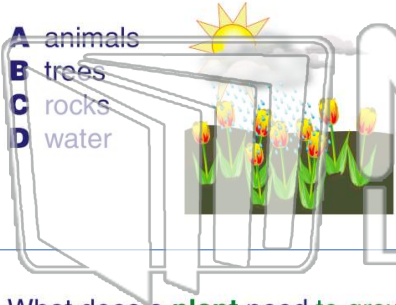




Name _____ Class _____ Date _____


1 Plants need _____ to grow.

- A animals
- B trees
- C rocks
- D water



2 How do plants get water?

- A from the rain
- B from trees
- C from grass
- D from rocks



3 What does a plant need to grow?

- A air



4 What needs sunlight to grow?

- A animals



5



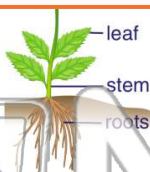
PREVIEW

Please [Sign In](#) or [Sign Up](#) to download the printable version of this worksheet

7

come from?

- A the roots of a plant
- B the stem of a plant
- C the flower of a plant
- D the leaves of a plant



or it?

- A a tiny plant
- B soil
- C water
- D flower petals



9

The roots grow _____.

- A above the soil
- B toward the sky
- C into the soil
- D toward the Sun



10

What is the arrow pointing to?

- A the flower
- B the roots
- C the leaves
- D the stem

