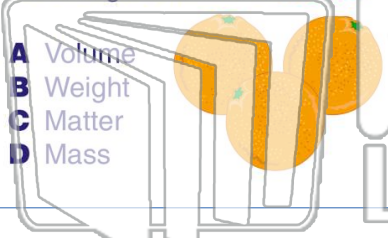




Name _____ Class _____ Date _____

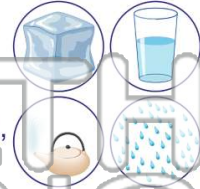
1 _____ is all around you. It is **anything that takes up space**. An orange is made of **matter**.

- A Volume
- B Weight
- C Matter
- D Mass



2 **Matter** can _____.

- A only be a liquid
- B only be a gas
- C only be a solid
- D be a solid, liquid, or gas



3 Does a **solid** take up **space**?

- A yes



4 _____ has its **own shape**.

- A Air

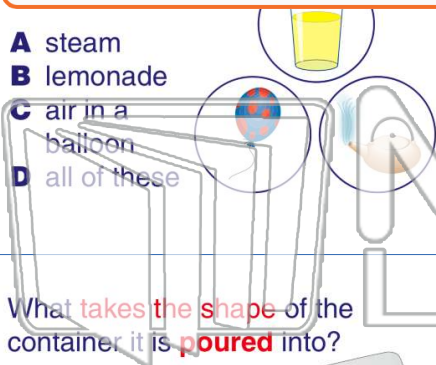


PREVIEW

Please [Sign In](#) or [Sign Up](#) to download the printable version of this worksheet

7

- A steam
- B lemonade
- C air in a balloon
- D all of these



when it is **poured** into a glass or a bowl.

- A color
- B weight
- C shape
- D size



9 What **takes the shape** of the container it is **poured** into?

- A a solid
- B a liquid
- C wood
- D a brick



10 Which is a **liquid**?

- A air
- B milk
- C a book
- D a rock

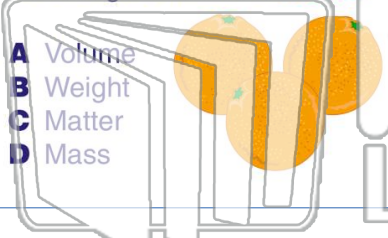




Name _____ Class _____ Date _____

1 _____ is all around you. It is **anything that takes up space**. An orange is made of **matter**.

- A Volume
- B Weight
- C Matter
- D Mass



2 **Matter** can _____.

- A only be a liquid
- B only be a gas
- C only be a solid
- D be a solid, liquid, or gas



3 Does a **solid** take up **space**?

- A yes



4 _____ has its **own shape**.

- A Air



5

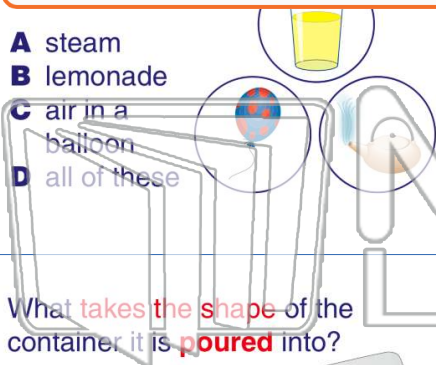


PREVIEW

Please [Sign In](#) or [Sign Up](#) to download the printable version of this worksheet

7

- A steam
- B lemonade
- C air in a balloon
- D all of these



when it is **poured** into a glass or a bowl.

- A color
- B weight
- C shape
- D size



9 What **takes the shape** of the container it is **poured** into?

- A a solid
- B a liquid
- C wood
- D a brick



10 Which is a **liquid**?

- A air
- B milk
- C a book
- D a rock

