



Name _____ Class _____ Date _____

1 This owl is hunting a mouse. The owl wants to eat the mouse. Which animal is the prey?

- A the owl
- B the mouse
- C the ant
- D the butterfly



2 This bear is trying to catch a fish. The bear wants to eat the fish. Which animal is the predator?

- A the bear
- B the fish
- C the dragonfly
- D the bird



3 This wolf is chasing the deer. The wolf wants to eat the deer. Which animal is the prey?


4 A _____ shows the order of plants and animals being eaten by other animals.



5
PREVIEW
Please [Sign In](#) or [Sign Up](#) to download the printable version of this worksheet

7
food chain?

- A a plant
- B a tiger
- C a rabbit
- D water



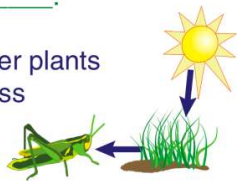
energy by _____.

- A getting bigger
- B running
- C jumping
- D eating




9 Animals get their energy by eating plants or other animals. Plants get energy _____.

- A by eating other plants
- B by eating grass
- C from animals
- D from the Sun



10 All _____ are a part of a food chain.

- A rocks
- B living things
- C nonliving things
- D dead things





Name _____ Class _____ Date _____

1 This owl is hunting a mouse. The owl wants to eat the mouse. Which animal is the prey?



- A the owl
- B the mouse
- C the ant
- D the butterfly

2 This bear is trying to catch a fish. The bear wants to eat the fish. Which animal is the predator?



- A the bear
- B the fish
- C the dragonfly
- D the bird

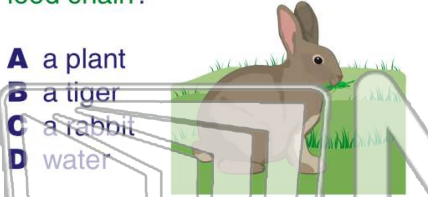
3 This wolf is chasing the deer. The wolf wants to eat the deer. Which animal is the prey?

4 A _____ shows the order of plants and animals being eaten by other animals.



5
PREVIEW
Please [Sign In](#) or [Sign Up](#) to download the printable version of this worksheet

7
food chain?



- A a plant
- B a tiger
- C a rabbit
- D water

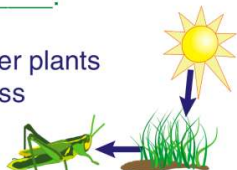
energy by _____.

- A getting bigger
- B running
- C jumping
- D eating



9 Animals get their energy by eating plants or other animals. Plants get energy _____.

- A by eating other plants
- B by eating grass
- C from animals
- D from the Sun



10 All _____ are a part of a food chain.

- A rocks
- B living things
- C nonliving things
- D dead things

