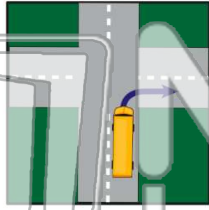




Name _____ Class _____ Date _____

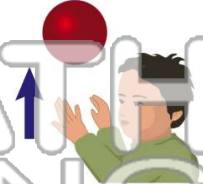
1 The **bus** is _____.

- A turning left
- B turning right
- C going straight
- D going backwards



2 A boy is **throwing the ball** _____ into the air.

- A to the left
- B straight down
- C straight up
- D to the right



3 To move this checker onto the **center square**, you would have to move it _____ one square.

4 This **sign shows** that the road _____.



PREVIEW

Please [Sign In](#) or [Sign Up](#) to download the printable version of this worksheet

7 **A** not move
B roll down the hill slowly
C roll down the hill quickly
D stop in the middle of the hill




A fall to the floor quickly
B float in the air
C fall to the floor slowly
D fall up in the air



9 You would need _____ force to **move a desk** than you would need to **move a book**.

- A more
- B less
- C the same
- D not as much



10 A rabbit can run **fast**. Which is the **fastest speed**?

- A 1 mile per hour
- B 2 miles per hour
- C 5 miles per hour
- D 10 miles per hour

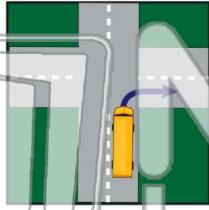




Name _____ Class _____ Date _____

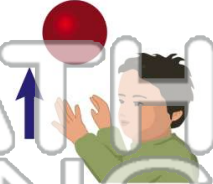
1 The **bus** is _____.

- A turning left
- B turning right
- C going straight
- D going backwards



2 A boy is **throwing the ball** _____ into the air.

- A to the left
- B straight down
- C straight up
- D to the right



3 To move this checker onto the **center square**, you would have to move it _____ one square.

4 This **sign shows** that the road _____.



PREVIEW

Please [Sign In](#) or [Sign Up](#) to download the printable version of this worksheet

7 _____ force to **move a desk** than you would need to **move a book**.

- A not move
- B roll down the hill slowly
- C roll down the hill quickly
- D stop in the middle of the hill



8 A rabbit can run **fast**. Which is the **fastest speed**?

- A fall to the floor quickly
- B float in the air
- C fall to the floor slowly
- D fall up in the air



9 You would need _____ force to **move a desk** than you would need to **move a book**.

- A more
- B less
- C the same
- D not as much



10 _____

- A 1 mile per hour
- B 2 miles per hour
- C 5 miles per hour
- D 10 miles per hour

