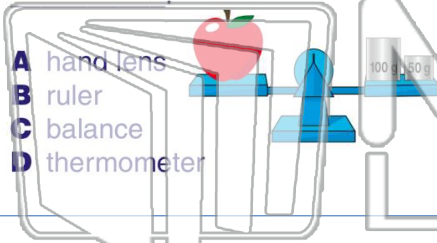




Name \_\_\_\_\_ Class \_\_\_\_\_ Date \_\_\_\_\_

1 To **measure the weight** of an object, scientists use a



2 This apple **weighs** \_\_\_\_\_ grams.



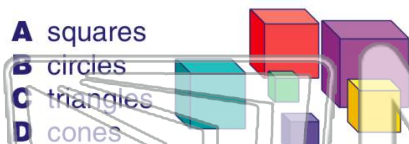
3 When a scientist **puts objects in certain groups**, it is called

4 These objects are **sorted by** their \_\_\_\_\_.

**PREVIEW**

Please [Sign In](#) or [Sign Up](#) to download the printable version of this worksheet

7 **Shape:** what **shape** are they:



8 Sort objects by their **texture**. What is the **texture** of these objects?



9 The way an object **feels** is called its \_\_\_\_\_.

- A sound
- B weight
- C texture
- D color



10 What kind of **texture** does **sandpaper** have?

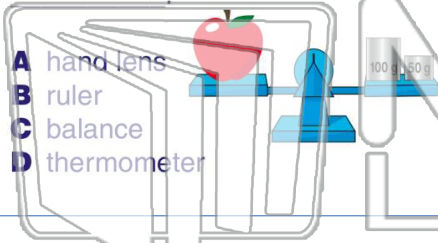
- A slippery
- B soft
- C smooth
- D rough





Name \_\_\_\_\_ Class \_\_\_\_\_ Date \_\_\_\_\_

1 To **measure the weight** of an object, scientists use a



2 This apple **weighs** \_\_\_\_\_ grams.



3 When a scientist **puts objects in certain groups**, it is called

4 These objects are **sorted by** their \_\_\_\_\_.

5

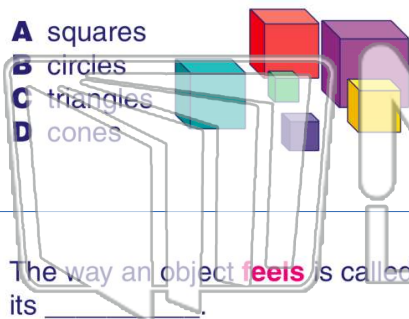
**PREVIEW**

Please [Sign In](#) or [Sign Up](#) to download the printable version of this worksheet

7


8 **Shape:** What **shape** are they?

- A squares
- B circles
- C triangles
- D cones



9 Sort objects by their **texture**. What is the **texture** of these objects?

- A soft
- B hard
- C bumpy
- D slimy



9 The way an object **feels** is called its \_\_\_\_\_.

- A sound
- B weight
- C texture
- D color



10 What kind of **texture** does **sandpaper** have?

- A slippery
- B soft
- C smooth
- D rough

