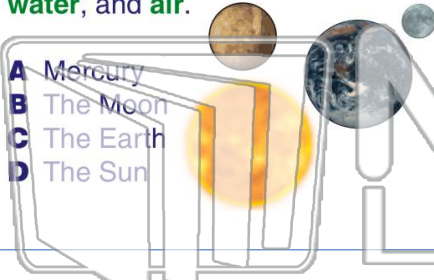




Name _____ Class _____ Date _____

1 _____ is made of **land**, **water**, and **air**.

- A Mercury
- B The Moon
- C The Earth
- D The Sun



2 **Earth** has more **water** than land.
True or false?

- A true
- B false



3 On a globe, what **color** shows **water**?



4 Can the **land** on Earth **change**?

- A yes



5



PREVIEW

Please [Sign In](#) or [Sign Up](#) to download the printable version of this worksheet

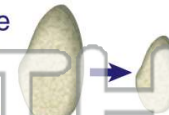
7

- A trees
- B cars
- C the sun
- D water, wind, and ice



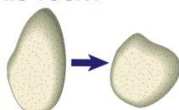
Over many years, what has **weathering** done to this rock?

- A changed its shape
- B changed its color
- C changed its size
- D changed its smell




9 **Weathering** changed this rock over many years. What has **weathering** done to this rock?

- A changed its smell
- B changed its color
- C changed its minerals
- D changed its shape



10 **Weathering** changed this rock over many years. What has **weathering** done to this rock?

- A changed its smell
- B changed its color
- C changed its size
- D changed its shape





Name _____ Class _____ Date _____

1 _____ is made of **land**, **water**, and **air**.

- A Mercury
- B The Moon
- C The Earth
- D The Sun



2 **Earth** has more **water** than land.
True or false?

- A true
- B false



3 On a globe, what **color** shows **water**?



4 Can the **land** on Earth **change**?

- A yes



5



PREVIEW

Please [Sign In](#) or [Sign Up](#) to download the printable version of this worksheet

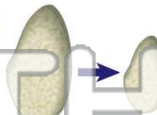
7

- A trees
- B cars
- C the sun
- D water, wind, and ice



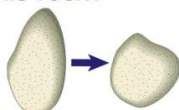
Over many years, what has **weathering** done to this rock?

- A changed its shape
- B changed its color
- C changed its size
- D changed its smell



9 **Weathering** changed this rock over many years. What has **weathering** done to this rock?

- A changed its smell
- B changed its color
- C changed its minerals
- D changed its shape



10 **Weathering** changed this rock over many years. What has **weathering** done to this rock?

- A changed its smell
- B changed its color
- C changed its size
- D changed its shape

