



Name _____ Class _____ Date _____

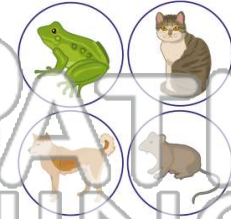
1 A _____ is how a living thing **grows** from a **baby** into an **adult**.

- A group
- B habitat
- C food chain
- D life cycle



2 A _____ lays **eggs**.

- A frog
- B cat
- C dog
- D mouse



3 _____ grow into **adult frogs**.

- A Lizards



4 Is this correct order of the **life cycle of a frog**?

egg → tadpole → _____ → adult

5



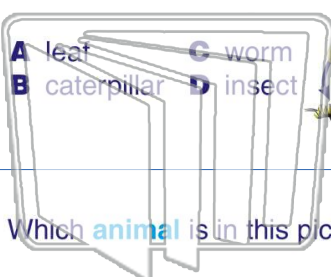
PREVIEW

Please [Sign In](#) or [Sign Up](#) to download the printable version of this worksheet

7

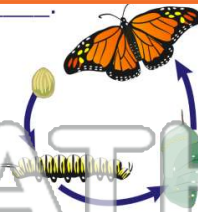
egg → ? → chrysalis → butterfly

- A leaf
- B caterpillar
- C worm
- D insect



8 _____ or a _____.

- A worm
- B butterfly
- C seed
- D tadpole



9

Which **animal** is in this picture?

- A a caterpillar
- B a fly
- C a bird
- D a butterfly



10

A **plant** begins its life as _____.

- A a seed
- B an egg
- C a shell
- D a leaf





Name _____ Class _____ Date _____

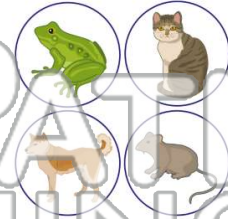
1 A _____ is how a living thing **grows** from a **baby** into an **adult**.

- A group
- B habitat
- C food chain
- D life cycle



2 A _____ lays **eggs**.

- A frog
- B cat
- C dog
- D mouse



3 _____ grow into **adult frogs**.

- A Lizards



4 Is this correct order of the **life cycle of a frog**?

egg → tadpole → _____ → adult

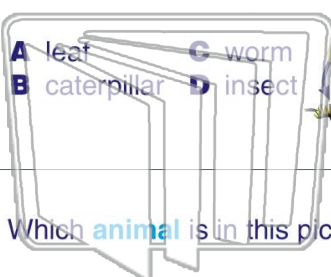


PREVIEW

Please [Sign In](#) or [Sign Up](#) to download the printable version of this worksheet

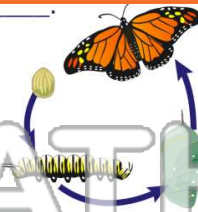
7 egg → ? → chrysalis → butterfly

- A leaf
- B caterpillar
- C worm
- D insect



8 _____ or a _____.

- A worm
- B butterfly
- C seed
- D tadpole



9 Which **animal** is in this picture?

- A a caterpillar
- B a fly
- C a bird
- D a butterfly



10 A **plant** begins its life as _____.

- A a seed
- B an egg
- C a shell
- D a leaf

