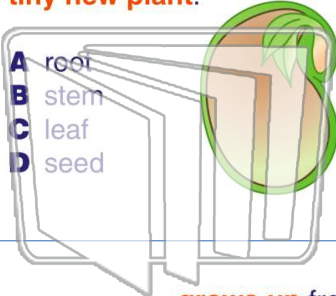




Name _____ Class _____ Date _____

1 Inside a _____ is a **tiny new plant**.



2 _____ **grow down** from a seed into the ground.

- A Leaves
- B Stems
- C Roots
- D Flowers



3 _____ **grows up** from a seed through the soil.

4 When a plant **starts to grow**, it is called _____.

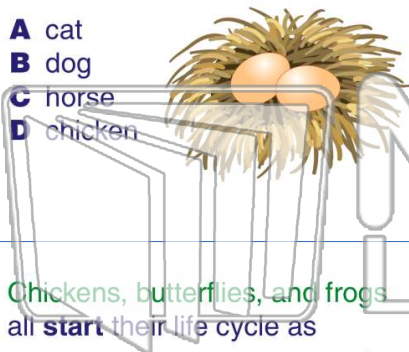


PREVIEW

Please [Sign In](#) or [Sign Up](#) to download the printable version of this worksheet

7 _____ **hatches** from _____ **an egg**.

- A cat
- B dog
- C horse
- D chicken



- A baby dolphin
- B baby chick
- C baby cat
- D young plant



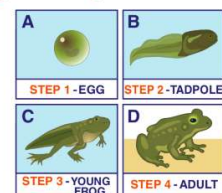
9 Chickens, butterflies, and frogs all **start** their life cycle as _____.

- A insects
- B eggs
- C seeds
- D young plants



10 Which box shows the **second step** of a frog's life cycle?

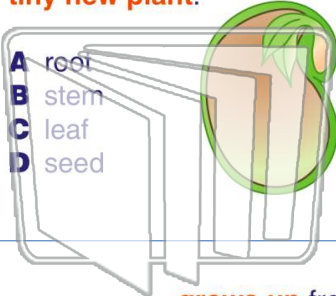
- A box A
- B box B
- C box C
- D box D





Name _____ Class _____ Date _____

1 Inside a _____ is a **tiny new plant**.



2 _____ **grow down** from a seed into the ground.

- A Leaves
- B Stems
- C Roots
- D Flowers



3 _____ **grows up** from a seed through the soil.

4 When a plant **starts to grow**, it is called _____.

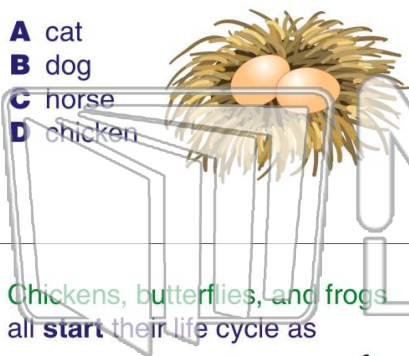


PREVIEW

Please [Sign In](#) or [Sign Up](#) to download the printable version of this worksheet

7 _____ **hatches** from _____ **an egg**.

- A cat
- B dog
- C horse
- D chicken



- A baby dolphin
- B baby chick
- C baby cat
- D young plant



9 Chickens, butterflies, and frogs all **start** their life cycle as _____.

- A insects
- B eggs
- C seeds
- D young plants



10 Which box shows the **second step** of a frog's life cycle?

- A box A
- B box B
- C box C
- D box D

