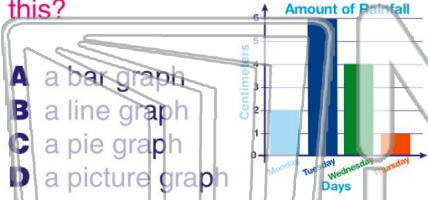




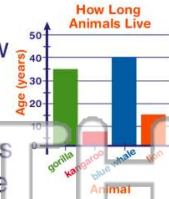
Name _____ Class _____ Date _____

1 Scientists use graphs to help show their data. **What kind of graph is this?**



- A a bar graph
- B a line graph
- C a pie graph
- D a picture graph

2 A **bar graph** uses _____ to show information.



- A colors and sounds
- B letters and texture
- C bars and numbers
- D circles and triangles

3 A _____ has **facts in rows and columns** which makes the information easy to read.

4 Look at this **bar graph**. Which plant grew the **tallest**?



5

PREVIEW

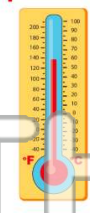
Please [Sign In](#) or [Sign Up](#) to download the printable version of this worksheet

7

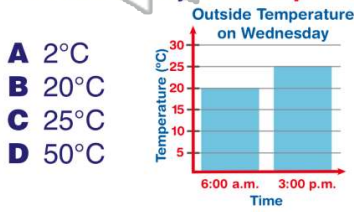
A 5
B 10
C 25
D 50

Year	Number of Rabbits
Last Year	55
This Year	60

- A balances
- B thermometers
- C measuring cups
- D rulers



9 What was the **temperature** outside on Wednesday at **3:00 p.m.**?



- A 2°C
- B 20°C
- C 25°C
- D 50°C

10 Which **season** has the **lowest** temperature?

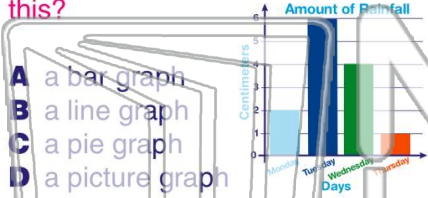
Season	Lowest Temperature
Winter	0°C
Spring	9°C
Summer	37°C
Fall	7°C

- A winter
- B spring
- C summer
- D fall



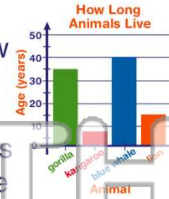
Name _____ Class _____ Date _____

1 Scientists use graphs to help show their data. **What kind of graph is this?**



- A a bar graph
- B a line graph
- C a pie graph
- D a picture graph

2 A **bar graph** uses _____ to show information.



- A colors and sounds
- B letters and texture
- C bars and numbers
- D circles and triangles


3 A _____ has **facts in rows and columns** which makes the information easy to read.

4 Look at this **bar graph**. Which plant grew the **tallest**?



PREVIEW

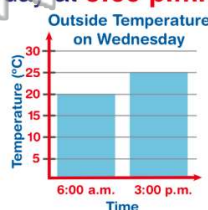
Please [Sign In](#) or [Sign Up](#) to download the printable version of this worksheet



- A 5
- B 10
- C 25
- D 50

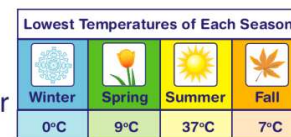
- A balances
- B thermometers
- C measuring cups
- D rulers

9 What was the **temperature** outside on Wednesday at **3:00 p.m.**?



- A 2°C
- B 20°C
- C 25°C
- D 50°C

10 Which **season** has the **lowest** temperature?



- A winter
- B spring
- C summer
- D fall