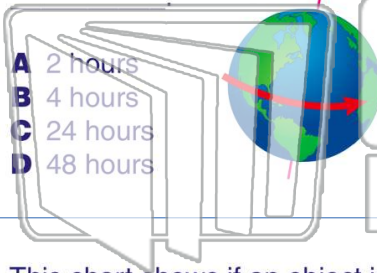




Name _____ Class _____ Date _____

1 Scientists know that **one rotation** of the earth takes **one day** or



- A 2 hours
- B 4 hours
- C 24 hours
- D 48 hours

2 How many **bottles** did Mrs. Kane's class collect on **Friday**?

| Mrs. Kane's Bottle Collection | | | | |
|-------------------------------|---------|-----------|----------|--------|
| Monday | Tuesday | Wednesday | Thursday | Friday |
| 5 | 7 | 9 | 13 | 6 |

- A 5
- B 6
- C 7
- D 9

3 This chart shows if an object is **magnetic or not**.

| Item | Attracted by Magnet? |
|---------------|----------------------|
| paper clip | yes |
| plastic spoon | no |
| iron nail | yes |

4 Look at the chart. Which items are **attracted by**

PREVIEW

Please [Sign In](#) or [Sign Up](#) to download the printable version of this worksheet

7 **Not float** in water.

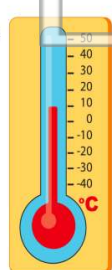
| | |
|------|-----|
| key | no |
| cork | yes |
| rock | no |

- A wood and cork
- B key and rock
- C cork and key
- D rock and wood



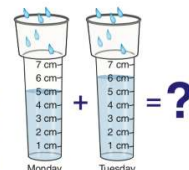
- A 3 centimeters (cm)
- B 10 centimeters (cm)
- C 15 centimeters (cm)
- D 300 centimeters (cm)

9 This **thermometer** shows that it is _____ outside.



- A 0°C
- B 10°C
- C 25°C
- D 30°C

10 It rained **5 centimeters** on Monday and **6 centimeters** on Tuesday. How many centimeters did it rain **all together**?




- A 1 centimeter
- B 11 centimeters
- C 50 centimeters
- D 65 centimeters



Name _____ Class _____ Date _____

1 Scientists know that **one rotation** of the earth takes **one day** or



- A 2 hours
- B 4 hours
- C 24 hours
- D 48 hours

2 How many **bottles** did Mrs. Kane's class collect on **Friday**?

| Mrs. Kane's Bottle Collection | | | | |
|-------------------------------|---------|-----------|----------|--------|
| Monday | Tuesday | Wednesday | Thursday | Friday |
| 5 | 7 | 9 | 13 | 6 |

- A 5
- B 6
- C 7
- D 9

3 This chart shows if an object is **magnetic or not**.

| Item | Attracted by Magnet? |
|---------------|----------------------|
| paper clip | yes |
| plastic spoon | no |
| iron nail | yes |

4 Look at the chart. Which items are **attracted by**



5

PREVIEW

Please [Sign In](#) or [Sign Up](#) to download the printable version of this worksheet

7 **Not heat in water.**

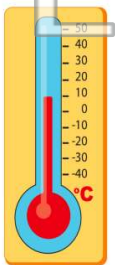
| | |
|------|-----|
| key | no |
| cork | yes |
| rock | no |

- A wood and cork
- B key and rock
- C cork and key
- D rock and wood



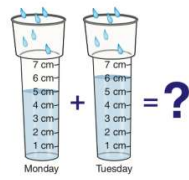
- A 3 centimeters (cm)
- B 10 centimeters (cm)
- C 15 centimeters (cm)
- D 300 centimeters (cm)

9 This **thermometer** shows that it is _____ outside.



- A 0°C
- B 10°C
- C 25°C
- D 30°C

10 It rained **5 centimeters** on Monday and **6 centimeters** on Tuesday. How many centimeters did it rain **all together**?



- A 1 centimeter
- B 11 centimeters
- C 50 centimeters
- D 65 centimeters