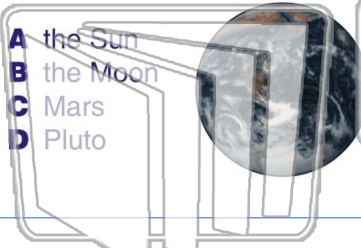




Name \_\_\_\_\_ Class \_\_\_\_\_ Date \_\_\_\_\_

1 The Earth moves **around** \_\_\_\_\_ in a **big circle**.



- A the Sun
- B the Moon
- C Mars
- D Pluto

2 The Earth **moves in a path** around the Sun. What is this **path** called?



- A a day
- B a turn
- C a switch
- D an orbit

3 When the **Sun is out**, we can also see \_\_\_\_\_.



4 **Earth spins** \_\_\_\_\_ around each day.



## PREVIEW

Please [Sign In](#) or [Sign Up](#) to download the printable version of this worksheet

7 \_\_\_\_\_ on is **facing the Sun**, it is **daytime** on our side.

True or false?



- A true
- B false

- A the Sun
- B Mars
- C the Moon
- D Mercury




9 How **many moons** does Earth have?

- A four
- B three
- C two
- D one



10 Do **all planets** have only **one moon**?

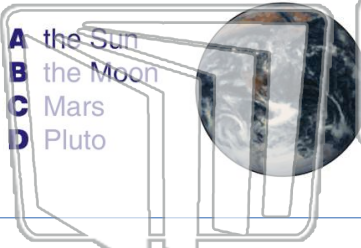
- A yes
- B no





Name \_\_\_\_\_ Class \_\_\_\_\_ Date \_\_\_\_\_

1 The Earth moves **around** \_\_\_\_\_ in a **big circle**.



- A the Sun
- B the Moon
- C Mars
- D Pluto

2 The Earth **moves in a path** around the Sun. What is this **path** called?



- A a day
- B a turn
- C a switch
- D an orbit

3 When the **Sun is out**, we can also see \_\_\_\_\_.



4 **Earth spins** \_\_\_\_\_ around each day.



## PREVIEW

Please [Sign In](#) or [Sign Up](#) to download the printable version of this worksheet

7 \_\_\_\_\_ on is **facing the Sun**, it is **daytime** on our side.



True or false?

- A true
- B false

- A the Sun
- B Mars
- C the Moon
- D Mercury




9 How **many moons** does Earth have?



- A four
- B three
- C two
- D one

10 Do all planets have only **one moon**?



- A yes
- B no