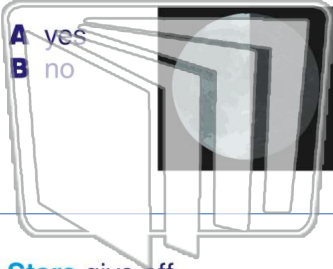




Name _____ Class _____ Date _____

1 Do you see the **same amount** of the **Moon** every night?



2 A _____ is a **hot ball** of **gas**.

- A planet
- B moon
- C star
- D solar system



3 **Stars** give off _____.

- A light



4 The Sun is a star. The Sun looks **bigger and brighter** than other stars because _____.

5



PREVIEW

Please [Sign In](#) or [Sign Up](#) to download the printable version of this worksheet

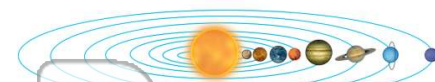
7

you see in the sky?

- A the Sun
- B all eight planets
- C a bright blue sky
- D the Moon and stars



solar system.



- A 10
- B 11
- C 6
- D 8

9 A _____ helps us **see stars and planets**. It is a **tool** that makes things that are far away look close.


- A telescope
- B microscope
- C magnifying glass
- D hand lens



10 The **solar system** is the **Sun**, **8 planets**, their **moons**, and other objects in space around the Sun.

True or false?

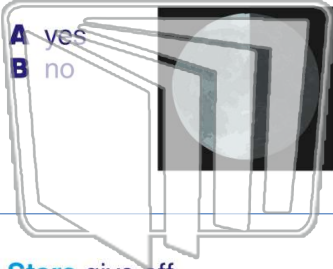
- A true
- B false





Name _____ Class _____ Date _____

1 Do you see the **same amount** of the **Moon** every night?



- A yes
- B no

2 A _____ is a **hot ball of gas**.



- A planet
- B moon
- C star
- D solar system

3 **Stars** give off _____.

- A light

4 The Sun is a star. The Sun looks **bigger and brighter** than other stars because _____.

5



PREVIEW

Please [Sign In](#) or [Sign Up](#) to download the printable version of this worksheet

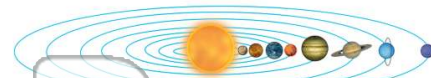
7

you see in the sky?



- A the Sun
- B all eight planets
- C a bright blue sky
- D the Moon and stars

solar system.



- A 10
- B 11
- C 6
- D 8

9 A _____ helps us **see stars and planets**. It is a **tool** that makes things that are far away look close.

- A telescope
- B microscope
- C magnifying glass
- D hand lens



10 The **solar system** is the **Sun**, **8 planets**, their **moons**, and other objects in space around the Sun.

True or false?

- A true
- B false

