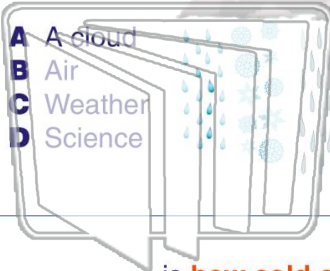




Name _____ Class _____ Date _____

1 _____ is what it is like
outside.



2 Weather _____.

- A never changes
- B always stays the same
- C is the same every day
- D changes all the time



3 _____ is **how cold or hot**
something is.



4 What do we use to **measure**
temperature?

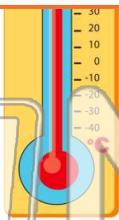


PREVIEW

Please [Sign In](#) or [Sign Up](#) to download
the printable version of this worksheet

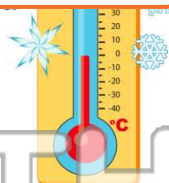
7 _____ number.

- A little
- B high
- C low
- D bottom



_____ number.

- A top
- B upper
- C high
- D low



9 The **temperature is high**. What
would be good to **wear** outside?

- A a jacket
- B a scarf and gloves
- C shorts and a t-shirt
- D a sweater



10 You look at a thermometer and the
temperature is low. What would
be good to **wear** outside?

- A a warm coat
- B shorts
- C a t-shirt
- D flip flops

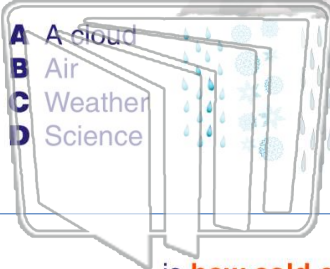




Name _____ Class _____ Date _____

1 _____ is what it is like outside.

- A A cloud
- B Air
- C Weather
- D Science



2 Weather _____.

- A never changes
- B always stays the same
- C is the same every day
- D changes all the time



3 _____ is how cold or hot something is.

4 What do we use to measure temperature?

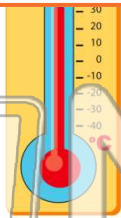


PREVIEW

Please [Sign In](#) or [Sign Up](#) to download the printable version of this worksheet

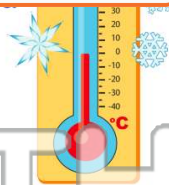
7 _____ number.

- A little
- B high
- C low
- D bottom



8 _____ number.

- A top
- B upper
- C high
- D low



9 The temperature is high. What would be good to wear outside?

- A a jacket
- B a scarf and gloves
- C shorts and a t-shirt
- D a sweater



10 You look at a thermometer and the temperature is low. What would be good to wear outside?

- A a warm coat
- B shorts
- C a t-shirt
- D flip flops

