




Name _____ Class _____ Date _____

1 **Weather** is what it is like outside.

Circle true or false.

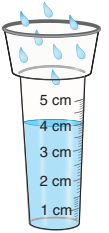
true

false



6 What does a **rain gauge** measure? Check the answer.

- a. how much rain falls
- b. how hot it is outside
- c. how cold it is outside



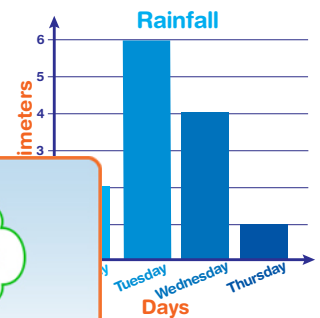
2 _____ is how cold or hot something is.

Air

Outside

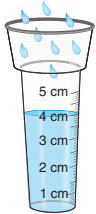


7 Look at the chart. Which day had the most rainfall? Write it.



Temperatu

3 What do Circle it.



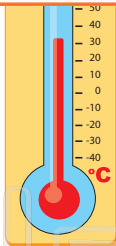
PREVIEW

Please [Sign In](#) or [Sign Up](#) to download the printable version of this worksheet

4 When it is **not**, the **thermometer** shows a _____ number.

high

low




5 Rain can turn to sleet or snow when it gets very _____.

hot

warm

cold

dry



5 You look at a thermometer and the **temperature is low**. What would be good to wear outside? Circle it.



10 When **a lot of snow falls quickly**, it is called a _____.

- a. hurricane
- b. tornado
- c. blizzard






Weather - Answer Key

Name _____ Class _____ Date _____

1 **Weather** is what it is like outside.

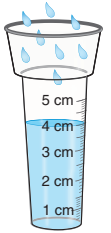
Circle true or false.

true
false



6 What does a **rain gauge** measure? Check the answer.

- a. how much rain falls
- b. how hot it is outside
- c. how cold it is outside



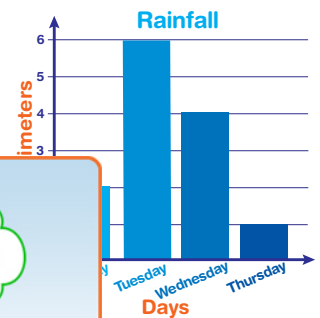
2 _____ is how cold or hot something is.

Air **Outside**

Temperature



7 Look at the chart. Which day had the most rainfall? Write it.



3 What do _____ Circle it.

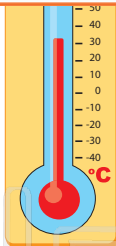


PREVIEW

Please [Sign In](#) or [Sign Up](#) to download the printable version of this worksheet


4 When it is **not**, the **thermometer** shows a _____ number.

high
low



5 Rain can turn to sleet or snow when it gets very _____.

hot warm
cold dry



5 You look at a thermometer and the **temperature is low**. What would be good to wear outside? Circle it.



10 When **a lot of snow falls quickly**, it is called a _____.

- a. hurricane
- b. tornado
- c. blizzard

