



Name \_\_\_\_\_ Class \_\_\_\_\_ Date \_\_\_\_\_

1 What does it mean to make a **prediction**?

- A to see what happened
- B to tell what you think is going to happen
- C to tell what you know for sure will happen
- D to do an experiment



2 These **shapes** show \_\_\_\_\_.



- A a pattern
- B a line
- C a large number
- D a letter

3 Scientists use many tools when they are making observations. This **tool** for **measuring length** is called

4 A **ruler** is used to \_\_\_\_\_.

- A weigh objects

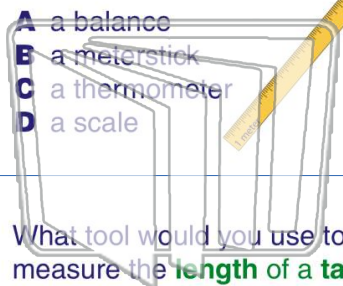


## PREVIEW

Please [Sign In](#) or [Sign Up](#) to download the printable version of this worksheet

7 name of this **tool**?

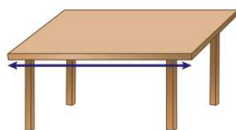
- A a balance
- B a meterstick
- C a thermometer
- D a scale



- A to measure the weight of objects
- B to measure the length of objects
- C to see if an object will float
- D to measure the color of objects

9 What tool would you use to measure the **length** of a **table**?

- A a clock
- B a measuring cup
- C a balance
- D a meterstick



10 This is a **tool** that scientists use to measure **liquids**. What is the **name** of this **tool**?

- A a measuring cup
- B a balance
- C a clock
- D a ruler





Name \_\_\_\_\_ Class \_\_\_\_\_ Date \_\_\_\_\_

1 What does it mean to make a **prediction**?

- A to see what happened
- B to tell what you think is going to happen
- C to tell what you know for sure will happen
- D to do an experiment



2 These **shapes** show \_\_\_\_\_.



- A a pattern
- B a line
- C a large number
- D a letter

3 Scientists use many tools when they are making observations. This **tool for measuring length** is called

4 A **ruler** is used to \_\_\_\_\_.

- A weigh objects

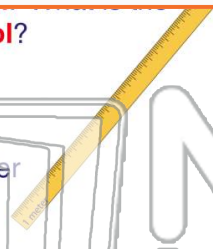


## PREVIEW

Please [Sign In](#) or [Sign Up](#) to download the printable version of this worksheet

7 name of this **tool**?

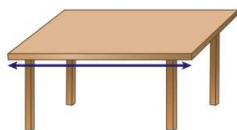
- A a balance
- B a meterstick
- C a thermometer
- D a scale



- A to measure the weight of objects
- B to measure the length of objects
- C to see if an object will float
- D to measure the color of objects

9 What tool would you use to measure the **length of a table**?

- A a clock
- B a measuring cup
- C a balance
- D a meterstick



10 This is a **tool** that scientists use to measure **liquids**. What is the **name of this tool**?

- A a measuring cup
- B a balance
- C a clock
- D a ruler

