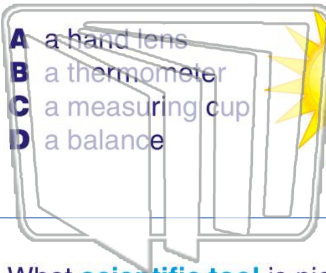




Name _____ Class _____ Date _____

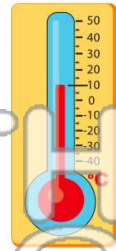
1 What **tool** would you use to see what the **temperature** is outside?

- A a hand lens
- B a thermometer
- C a measuring cup
- D a balance



2 What **temperature** does this thermometer show?

- A 5° Celsius
- B 10° Celsius
- C 15° Celsius
- D 25° Celsius



3 What **scientific tool** is pictured below?



4 What is a **balance** used for?

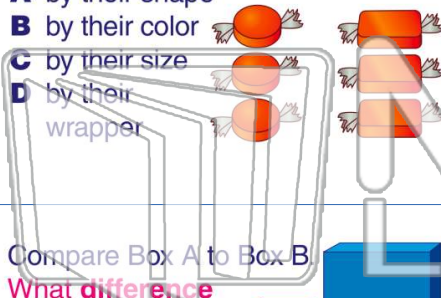


PREVIEW

Please [Sign In](#) or [Sign Up](#) to download the printable version of this worksheet

7

- A by their shape
- B by their color
- C by their size
- D by their wrapper



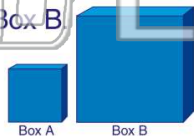
8 What is **texture**?



- A how tall something is
- B how much something weighs
- C how something feels
- D how something smells


9 Compare Box A to Box B. What **difference** do you notice?

- A They smell different.
- B They are different shapes.
- C They are different colors.
- D They are different sizes.



10 Which animal **weighs the most**?

- A a horse
- B an elephant
- C a hawk
- D a mouse

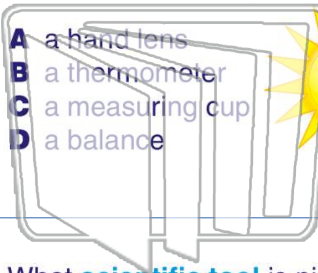




Name _____ Class _____ Date _____

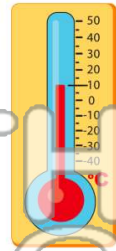
1 What **tool** would you use to see what the **temperature** is outside?

- A a hand lens
- B a thermometer
- C a measuring cup
- D a balance



2 What **temperature** does this thermometer show?

- A 5° Celsius
- B 10° Celsius
- C 15° Celsius
- D 25° Celsius




3 What **scientific tool** is pictured below?



4 What is a **balance** used for?



5

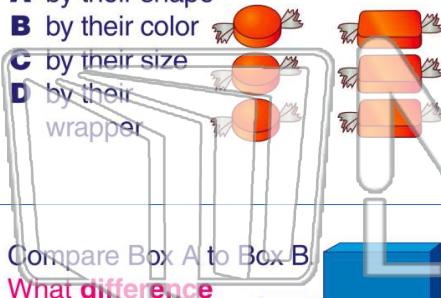


PREVIEW

Please [Sign In](#) or [Sign Up](#) to download the printable version of this worksheet

7

- A by their shape
- B by their color
- C by their size
- D by their wrapper

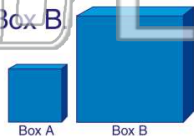


8 What is **texture**?



- A how tall something is
- B how much something weighs
- C how something feels
- D how something smells

9 Compare Box A to Box B. What **difference** do you notice?



- A They smell different.
- B They are different shapes.
- C They are different colors.
- D They are different sizes.

10 Which animal **weighs the most**?

- A a horse
- B an elephant
- C a hawk
- D a mouse

