



How do living things grow and change?

Name _____ Class _____ Date _____

1 Circle the things that **living things** can do.


never change grow
move eat

6 Which is an example of a **nonliving thing**? Circle it.




2 **Plants, animals, and people**

are all _____
things.




7 Some animals do not look like their parents when they are born. **Cross out** the animal below that **does not** look like its parents when it is born.

3 Name two plants and two animals.




PREVIEW

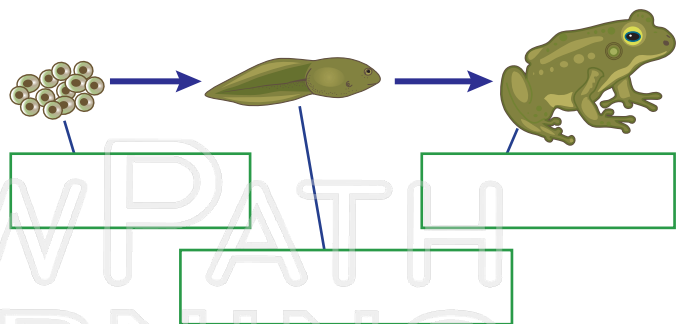
Please [Sign In](#) or [Sign Up](#) to download the printable version of this worksheet



4 Name two plants and two animals.



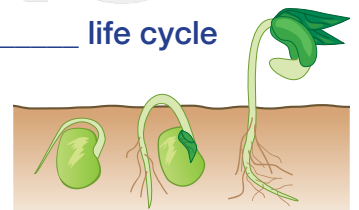
9 Label the stages of the **frog life cycle**.



5 People and animals **grow** and **change** as they go from a **baby** to an **adult**.



10 A _____ life cycle starts as a seed.





How do living things grow & change? - Answer Key

Name _____ Class _____ Date _____

1 Circle the things that **living things** can do.

never change

grow

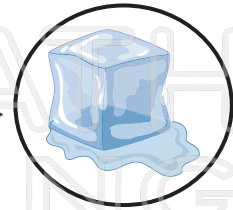
move

eat


2 **Plants, animals, and people** are all living things.



6 Which is an example of a **nonliving thing**? Circle it.



7 Some animals do not look like their parents when they are born. **Cross out** the animal below that **does not** look like its parents when it is born.




3 Name two **plants** and two **animals** that need

water, sunlight, air, soil, and food.




PREVIEW

Please [Sign In](#) or [Sign Up](#) to download the printable version of this worksheet



4 Name two **plants** and two **animals** that need

water, food, shelter, etc.

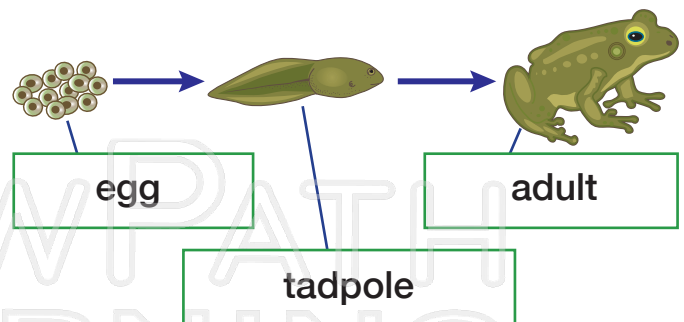


grow

5 People and animals grow and **change** as they go from a **baby** to an **adult**.



9 Label the stages of the **frog life cycle**.



10 A plant's life cycle starts as a **seed**.

