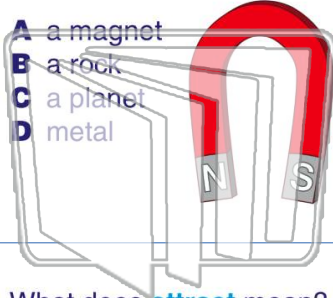




Name _____ Class _____ Date _____

1 What is pictured below?

- A a magnet
- B a rock
- C a planet
- D metal



2 A magnet **attracts** _____.

- A all things made of stone
- B all things made of iron
- C all metals
- D any kind of wood



3 What does **attract** mean?

- A to drive far

4 Which item would be **attracted** by a magnet?

PREVIEW

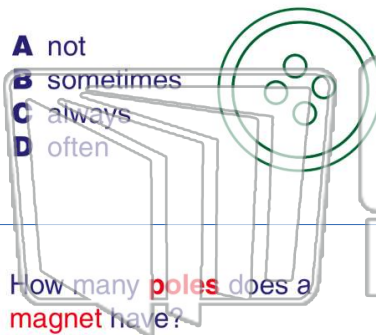
Please [Sign In](#) or [Sign Up](#) to download the printable version of this worksheet

5

7

magnetic.

- A not
- B sometimes
- C always
- D often



magnetic.

- A often
- B sometimes
- C always
- D not




9 How many **poles** does a magnet have?

- A none
- B two
- C three
- D four



10 The **two poles** of a magnet are the _____ poles.

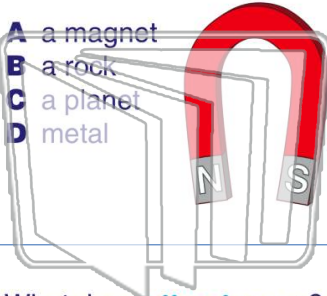
- A north and south
- B north and east
- C south and west
- D north and west





Name _____ Class _____ Date _____

1 What is pictured below?



- A a magnet
- B a rock
- C a planet
- D metal

2 A magnet **attracts** _____.



- A all things made of stone
- B all things made of iron
- C all metals
- D any kind of wood

3 What does **attract** mean?

- A to drive far

4 Which item would be **attracted** by a magnet?

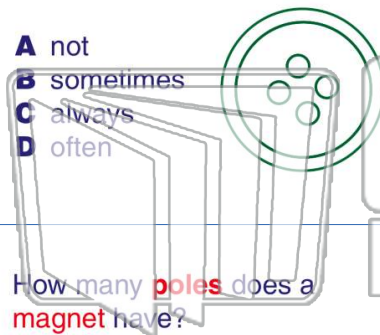


PREVIEW

Please [Sign In](#) or [Sign Up](#) to download the printable version of this worksheet

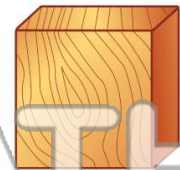
7 magnetic.

- A not
- B sometimes
- C always
- D often



magnetic.

- A often
- B sometimes
- C always
- D not



9 How many **poles** does a magnet have?

- A none
- B two
- C three
- D four



10 The **two poles** of a magnet are the _____ poles.

- A north and south
- B north and east
- C south and west
- D north and west

