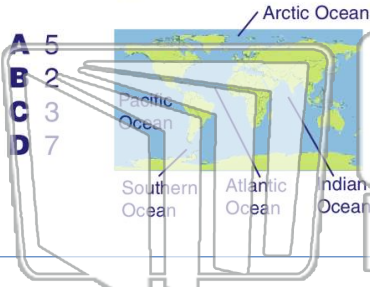




Name _____ Class _____ Date _____

1 How many **oceans** are on Earth?



- A 5
- B 2
- C 3
- D 7

2 What is the **length** of this fossil?



- A 8 cm
- B 13 cm
- C 5 cm
- D 3 cm

3 Which **class** collected the **most** glass bottles?



4 How much does **Box A** weigh?

A 6 grams 5 grams box A



PREVIEW

Please [Sign In](#) or [Sign Up](#) to download the printable version of this worksheet

7

Item	Attracted by Magnet?
piece of wood	no
eraser	no
plastic button	no
paperclip	yes

A eraser
B paperclip
C piece of wood
D plastic button

A block #1
B block #2
C block #3
D block #4

Block	Weight
Block #1	100 grams
Block #2	70 grams
Block #3	30 grams

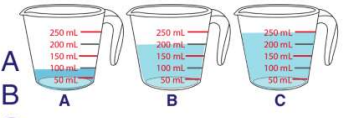
9 How much **water** is in this measuring cup?

- A 50 mL
- B 100 mL
- C 150 mL
- D 250 mL



10 Which measuring cup is holding **200 mL** of water?

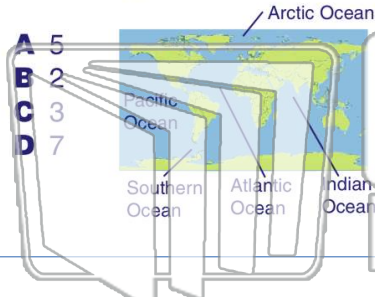
- A Cup A
- B Cup B
- C Cup C
- D none of the cups





Name _____ Class _____ Date _____

1 How many **oceans** are on Earth?



- A 5
- B 2
- C 3
- D 7

2 What is the **length** of this fossil?



- A 8 cm
- B 13 cm
- C 5 cm
- D 3 cm

3 Which **class** collected the **most** glass bottles?



4 How much does **Box A** weigh?

A 6 grams 5 grams box A

PREVIEW

Please [Sign In](#) or [Sign Up](#) to download the printable version of this worksheet

7

Item	Attracted by Magnet?
piece of wood	no
eraser	no
plastic button	no
paperclip	yes

- A eraser
- B paperclip
- C piece of wood
- D plastic button

- A block #1
- B block #2
- C block #3
- D block #4

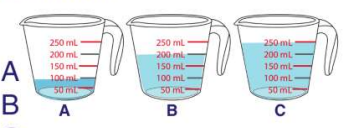
Block	Weight
Block #1	100 grams
Block #2	70 grams
Block #3	30 grams

9 How much **water** is in this measuring cup?



- A 50 mL
- B 100 mL
- C 150 mL
- D 250 mL

10 Which measuring cup is holding **200 mL** of water?



- A Cup A
- B Cup B
- C Cup C
- D none of the cups