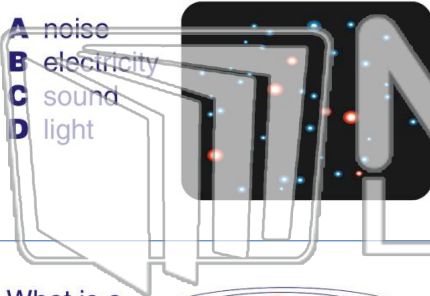




Name _____ Class _____ Date _____


1 Stars give off _____.

- A noise
- B electricity
- C sound
- D light

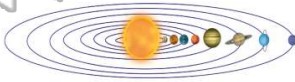


2 Which of the following is a **star**?

- A Earth
- B the Sun
- C Mars
- D an asteroid



3 What is a **planet**?



4 To _____ means **to travel in a path** around something.



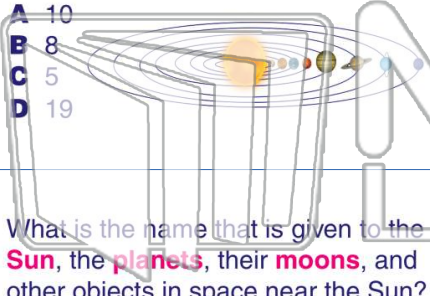
PREVIEW

Please [Sign In](#) or [Sign Up](#) to download the printable version of this worksheet

7 Mercury, Venus, Earth, Mars, Jupiter, Saturn, Uranus, and Neptune.

see the stars in a night sky?

- A 10
- B 8
- C 5
- D 19

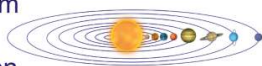


- A a telescope
- B a microscope
- C a hand lens
- D a balance

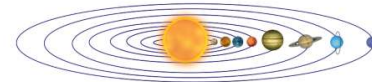


9 What is the name that is given to the **Sun**, the **planets**, their **moons**, and other objects in space near the Sun?

- A asteroid belt
- B solar system
- C a satellite
- D constellation



10 What does this picture show?



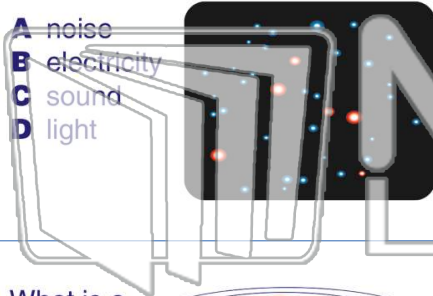
- A our solar system
- B a satellite
- C the asteroid belt
- D Earth's atmosphere



Name _____ Class _____ Date _____


1 Stars give off _____.

- A noise
- B electricity
- C sound
- D light

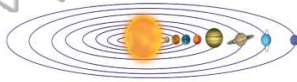


2 Which of the following is a **star**?

- A Earth
- B the Sun
- C Mars
- D an asteroid



3 What is a **planet**?



4 To _____ means **to travel in a path** around something.

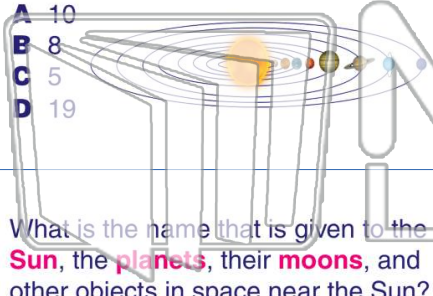


PREVIEW

Please [Sign In](#) or [Sign Up](#) to download the printable version of this worksheet

7 Mercury, Venus, Earth, Mars, Jupiter, Saturn, Uranus, and Neptune.

- A 10
- B 8
- C 5
- D 19



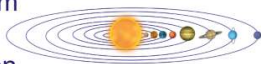
8 see the stars in a night sky?

- A a telescope
- B a microscope
- C a hand lens
- D a balance



9 What is the name that is given to the **Sun**, the **planets**, their **moons**, and other objects in space near the Sun?

- A asteroid belt
- B solar system
- C a satellite
- D constellation



10 What does this picture show?

- A our solar system
- B a satellite
- C the asteroid belt
- D Earth's atmosphere

