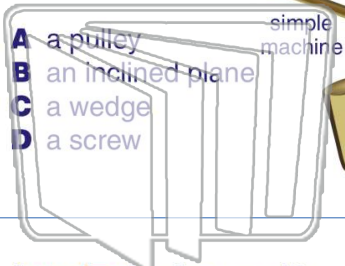




Name \_\_\_\_\_ Class \_\_\_\_\_ Date \_\_\_\_\_

1 What **simple machine** is shown in this picture?



- A a pulley
- B an inclined plane
- C a wedge
- D a screw

2 What does a **wedge** do?

- A pushes things apart
- B pushes things together
- C fastens things together
- D helps lift heavy things



3 A **wedge** is often used to \_\_\_\_\_.

4 What is a **screw** used for?

- A to move a load



5



## PREVIEW

Please [Sign In](#) or [Sign Up](#) to download the printable version of this worksheet

7

you might see on a **playground**:

- A a swing
- B a slide
- C a seesaw
- D monkey bars



tires on a car **move**:

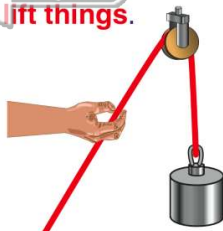
- A pulley
- B lever
- C screw
- D wheel and axle



9

A \_\_\_\_\_ is a **simple machine** that is used to **lift things**.

- A pulley
- B wedge
- C lever
- D screw



10

What **simple machine** is used to **raise and lower a flag** on a flagpole?

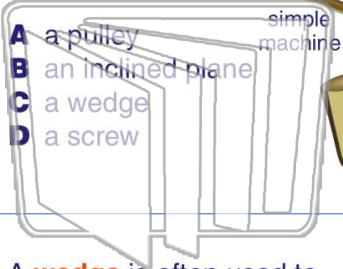
- A a wedge
- B a lever
- C a pulley
- D wheel and axle





Name \_\_\_\_\_ Class \_\_\_\_\_ Date \_\_\_\_\_

1 What **simple machine** is shown in this picture?



- A a pulley
- B an inclined plane
- C a wedge
- D a screw

2 What does a **wedge** do?



- A pushes things apart
- B pushes things together
- C fastens things together
- D helps lift heavy things

3 A **wedge** is often used to \_\_\_\_\_

4 What is a **screw** used for?

- A to move a load

5



## PREVIEW

Please [Sign In](#) or [Sign Up](#) to download the printable version of this worksheet

7

you might see on a **playground**:

- A a swing
- B a slide
- C a seesaw
- D monkey bars



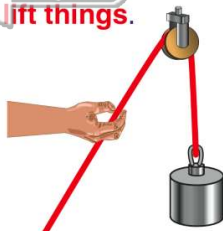
**tires** on a car move:

- A pulley
- B lever
- C screw
- D wheel and axle



9 A \_\_\_\_\_ is a **simple machine** that is used to **lift things**.

- A pulley
- B wedge
- C lever
- D screw



10 What **simple machine** is used to **raise and lower a flag** on a flagpole?

- A a wedge
- B a lever
- C a pulley
- D wheel and axle

