



Name \_\_\_\_\_ Class \_\_\_\_\_ Date \_\_\_\_\_

1 Which is a **living** thing?

- A a rock
- B soil
- C a plant
- D the Sun



2 Which is a job of the **roots** of a plant?

- A to take in sunshine
- B to keep the plant in the ground
- C to grow the flowers
- D to make the flowers smell nice



3 What do **roots** take in **from the soil** that a plant needs to grow healthy and strong?

4 What **part of the plant** is the arrow pointing to in the picture below?

5



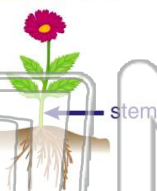
## PREVIEW

Please [Sign In](#) or [Sign Up](#) to download the printable version of this worksheet

7

from the \_\_\_\_\_ to the **leaves** of a plant.

- A seed
- B sky
- C flower
- D roots



the **stem** of a plant?

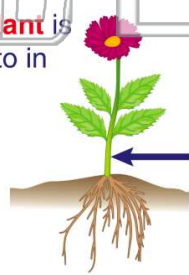
- A to turn the plant green
- B to make food for the plant
- C to keep a plant standing up tall
- D to make flowers smell nice



9

What **part of the plant** is the **arrow** pointing to in the picture?

- A roots
- B stem
- C flower
- D leaves



10

Green plants **make their own food**. **Where** is food for a green plant made?

- A in the flower
- B in the stem
- C in the roots
- D in the leaves





Name \_\_\_\_\_ Class \_\_\_\_\_ Date \_\_\_\_\_

1 Which is a **living** thing?

- A a rock
- B soil
- C a plant
- D the Sun



2 Which is a job of the **roots** of a plant?

- A to take in sunshine
- B to keep the plant in the ground
- C to grow the flowers
- D to make the flowers smell nice



3 What do **roots** take in **from the soil** that a plant needs to grow healthy and strong?

4 What **part of the plant** is the arrow pointing to in the picture below?



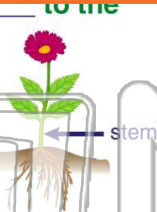
5

**PREVIEW**

Please [Sign In](#) or [Sign Up](#) to download the printable version of this worksheet

7 from the \_\_\_\_\_ to the **leaves** of a plant.

- A seed
- B sky
- C flower
- D roots



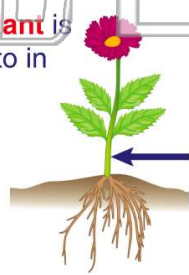
the **stem** of a plant?

- A to turn the plant green
- B to make food for the plant
- C to keep a plant standing up tall
- D to make flowers smell nice



9 What **part of the plant** is the **arrow** pointing to in the picture?

- A roots
- B stem
- C flower
- D leaves



10 Green plants **make their own food**. Where is food for a green plant made?

- A in the flower
- B in the stem
- C in the roots
- D in the leaves

