





Name _____ Class _____ Date _____

1 This picture shows that plants' _____ come in many **different shapes and sizes.**




A leaves C seeds
B roots D stems

2 What **part of the plant** is the **arrow** pointing to in the picture below?




A roots
B stem
C flower
D leaves

3 This picture shows that plants' _____ come in many **different colors and sizes.**



4 What is the job of the **flower** of a plant?



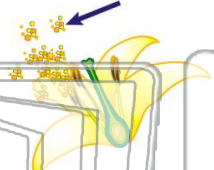
5



PREVIEW


Please [Sign In](#) or [Sign Up](#) to download the printable version of this worksheet

7 another flower to make _____.




A leaves
B seeds
C noise
D food

8 _____ from one flower to another?



A cats
B rain
C bees
D soil

9 What part of the plant makes **bees** want to land on a plant?



A the flower
B the stem
C the leaves
D the roots

10 Every _____ is a **tiny plant** with leaves, stems, and root parts.



A flower
B leaf
C seed
D root



Name _____ Class _____ Date _____


1 This picture shows that plants' _____ come in many **different shapes and sizes.**

A leaves C seeds
B roots D stems



2 What **part of the plant** is the **arrow** pointing to in the picture below?

A roots
B stem
C flower
D leaves



3 This picture shows that plants' _____ come in many **different colors and sizes.**

4 What is the job of the **flower** of a plant?

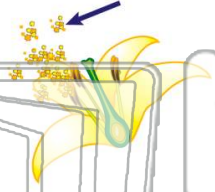


PREVIEW

Please [Sign In](#) or [Sign Up](#) to download the printable version of this worksheet

7 another flower to make _____.

A leaves
B seeds
C noise
D food



8 _____ from one flower to another?

A cats
B rain
C bees
D soil



9 What part of the plant makes **bees** want to land on a plant?

A the flower
B the stem
C the leaves
D the roots



10 Every _____ is a **tiny plant** with leaves, stems, and root parts.

A flower
B leaf
C seed
D root

