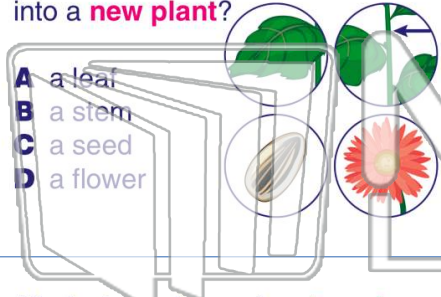




Name _____ Class _____ Date _____

1 Which of these can grow into a **new plant**?



- A a leaf
- B a stem
- C a seed
- D a flower

2 A plant's _____ is **how long** a plant takes to **grow, flower, and make seeds**.

- A height
- B size
- C life cycle
- D color

3 All plant seeds need **water, air,** and _____ **temperatures** to grow.


4 This shows the **right order** for plant growth.



PREVIEW

Please [Sign In](#) or [Sign Up](#) to download the printable version of this worksheet

7 Which living things need this **special gas** to live?



- A humans and animals
- B other plants
- C rocks
- D trees

8 _____ is **important** to **animals**?



- A animals eat plants
- B animals smell plants
- C animals step on plants
- D animals walk near plants

9 There are **different kinds** of plants. This is a picture of a plant that grows _____.

- A flowers
- B nuts
- C wings
- D seeds



10 Some plants do **not** grow flowers. This means they **do not make seeds**. These plants grow spores instead of _____.

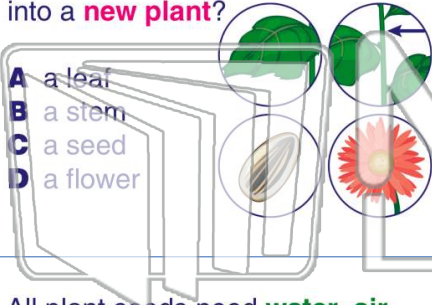
- A stems
- B roots
- C leaves
- D seeds





Name _____ Class _____ Date _____

1 Which of these can grow into a **new plant**?



- A a leaf
- B a stem
- C a seed
- D a flower

2 A plant's _____ is **how long** a plant takes to **grow**, **flower**, and **make seeds**.

- A height
- B size
- C life cycle
- D color

3 All plant seeds need **water**, **air**, and _____ **temperatures** to grow.

4 This shows the **right order** for plant growth.



PREVIEW

Please [Sign In](#) or [Sign Up](#) to download the printable version of this worksheet

7 Which living things need this **special gas** to live?

- A humans and animals
- B other plants
- C rocks
- D trees

8 _____ is **important** to **animals**?

- A animals eat plants
- B animals smell plants
- C animals step on plants
- D animals walk near plants

9 There are **different kinds** of plants. This is a picture of a plant that grows _____.

- A flowers
- B nuts
- C wings
- D seeds



10 Some plants do **not** grow flowers. This means they **do not make seeds**. These plants grow spores instead of _____.

- A stems
- B roots
- C leaves
- D seeds

