





Name _____ Class _____ Date _____

1 What **causes** weathering of rocks?



A wind, water, or ice
 B falling soil
 C sand that falls into the ocean
 D water that evaporates

2 What can **weathering** do?



A make rocks bigger
 B change the size and shape of rocks
 C make rocks hotter
 D make rocks grow taller

3 _____ takes place when rocks and soil are **moved** by wind or water from one place to another.


4 Waves crashing on a shoreline can **move the sand away** from a beach. This is an example of _____.



PREVIEW


Please [Sign In](#) or [Sign Up](#) to download the printable version of this worksheet

7 you feel the **ground shaking and vibrating**.




A An earthquake
 B A volcano
 C A hurricane
 D A tornado

8 _____ **a pond** and is surrounded by land.




A river
 B ocean
 C lake
 D puddle

9 A(n) _____ has **moving** water.



A river
 B lake
 C puddle
 D pond

10 A(n) _____ is **larger than a lake** and has **saltwater** instead of freshwater.




A puddle
 B ocean
 C river
 D stream




Name _____ Class _____ Date _____

1 What **causes** weathering of rocks?



A wind, water, or ice
 B falling soil
 C sand that falls into the ocean
 D water that evaporates

2 What can **weathering** do?



A make rocks bigger
 B change the size and shape of rocks
 C make rocks hotter
 D make rocks grow taller

3 _____ takes place when rocks and soil are **moved** by wind or water from one place to another.


4 Waves crashing on a shoreline can **move the sand away** from a beach. This is an example of _____.



PREVIEW

Please [Sign In](#) or [Sign Up](#) to download the printable version of this worksheet

7 you feel the **ground shaking and vibrating**.




A An earthquake
 B A volcano
 C A hurricane
 D A tornado

8 _____ is **surrounded by land**.




A river
 B ocean
 C lake
 D puddle

9 A(n) _____ has **moving** water.



A river
 B lake
 C puddle
 D pond

10 A(n) _____ is **larger than a lake** and has **saltwater** instead of freshwater.



A puddle
 B ocean
 C river
 D stream